




How do plants and animals live together?

Sci
B

Name _____ Class _____ Date _____

1 An acacia plant provides **shelter** for ants, while the ants **protect** the plant from animals that might eat it. **This is an example of**

A a life cycle
 B a food chain
 C a food web
 D how plants & animals help each other



2 **Carnivores** are animals that eat only other animals. **Some animals eat only plants; they are called**

A herb eaters
 B animal eaters
 C herbivores
 D omnivores



3 **More than one food chain** in a habitat makes up a _____.

4 This diagram shows the **links** between plants and animals, and **what eats what**. **It is called**



PREVIEW

Please [Sign In](#) or [Sign Up](#) to download the printable version of this worksheet

7 **Snake:** In what habitat would the food chain be found?
plant → lizard → snake → hawk

predator catches to eat.


- A arctic
 B desert
 C tundra
 D ocean

- A Predator
 B Prey
 C Producer
 D Habitat

9 **Which** food chain is in the **right order**?

10 Plants are producers. **Producers** are living things that _____.

- A frog → grasshopper → grass
 B grasshopper → grass → frog
 C grass → grasshopper → frog
 D grass → frog → grasshopper
- 

- A do not need water
 B eat other living things
 C do not make any food
 D make their own food
- 



How do plants and animals live together?

Sci
B

Name _____ Class _____ Date _____

1 An acacia plant provides **shelter** for ants, while the ants **protect** the plant from animals that might eat it. This is an example of _____.

- A a life cycle
- B a food chain
- C a food web
- D how plants & animals help each other



2 **Carnivores** are animals that eat only other animals. Some animals eat only plants; they are called _____.

- A herb eaters
- B animal eaters
- C herbivores
- D omnivores



3 More than one food chain in a habitat makes up a _____.

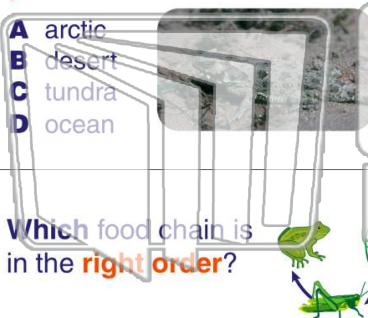
4 This diagram shows the **links** between plants and animals, and **what eats what**. It is called _____.

PREVIEW

Please [Sign In](#) or [Sign Up](#) to download the printable version of this worksheet

7 **Snake**. In what habitat would the food chain be found?
plant → lizard → snake → hawk

- A arctic
- B desert
- C tundra
- D ocean



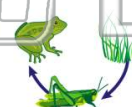
predator catches to eat.

- A Predator
- B Prey
- C Producer
- D Habitat



9 Which food chain is in the **right order**?

- A frog → grasshopper → grass
- B grasshopper → grass → frog
- C grass → grasshopper → frog
- D grass → frog → grasshopper



10 Plants are producers. **Producers** are living things that _____.

- A do not need water
- B eat other living things
- C do not make any food
- D make their own food

