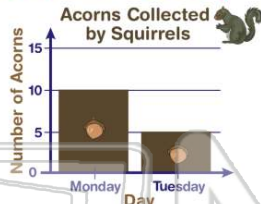




Name _____ Class _____ Date _____

1 How many **acorns** did the squirrels collect on **Monday and Tuesday combined**?

- A 5 acorns
- B 10 acorns
- C 15 acorns
- D 20 acorns



2 How many **birds** came to the bird feeder on **Monday**?

- A 17
- B 15
- C 8
- D 18

Day of the Week	Number of Birds that Came to Birdfeeder
Monday	8
Tuesday	15
Wednesday	17


3 By looking at the chart below, which animal is a **mammal**?

- A shark
- B snake
- C eagle

Animal	Kind of Animal
snake	reptile
shark	fish
eagle	bird

4 If **9** snakes are living in a desert and then **3** snakes die, how many snakes are **still alive**?

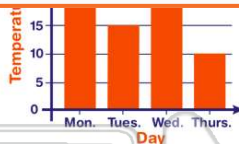
- A 12
- B 7



PREVIEW

Please [Sign In](#) or [Sign Up](#) to download the printable version of this worksheet

7 C Wednesday
D Monday



- B 2 hours
- C 4 hours
- D 42 hours




9 How many **kilometers** is **Earth** from the Sun?

- A 150 million
- B 228 million
- C 58 million
- D 108 million

Planet	Distance from Sun
Mercury	58 million kilometers
Venus	80 million kilometers
Earth	150 million kilometers
Mars	228 million kilometers

10 Put these three rocks in order from **smallest to largest**.

- A C → A → B
- B B → A → C
- C A → B → C
- D A → C → B

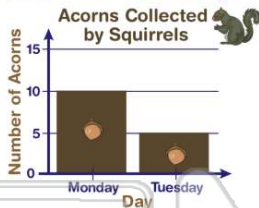




ANSWER KEY

How many **acorns** did the squirrels collect on **Monday and Tuesday combined**?

- A 5 acorns
- B 10 acorns
- C 15 acorns
- D 20 acorns



(C)

How many **birds** came to the bird feeder on **Monday**?

- A 17
- B 15
- C 8
- D 18

Day of the Week	Number of Birds that Came to Birdfeeder
Monday	8
Tuesday	15
Wednesday	17

(C)

By looking at the chart below, which animal is a **mammal**?


- A shark
- B snake
- C eagle
- D monkey

Animal	Kind of Animal
snake	reptile
shark	fish
eagle	bird
monkey	mammal

(d)

If **9** snakes are living in a desert and then **3** snakes die, how many snakes are **still alive**?

- A 12
- B 7
- C 8



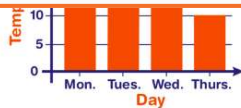
(d)



PREVIEW

Please [Sign In](#) or [Sign Up](#) to download the printable version of this worksheet

D Monday



- C 4 hours
- D 42 hours



How many **kilometers** is **Earth** from the Sun?

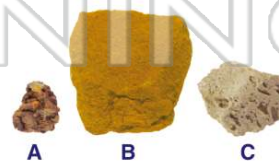
- A 150 million
- B 228 million
- C 58 million
- D 108 million

Planet	Distance from Sun
Mercury	58 million kilometers
Venus	80 million kilometers
Earth	150 million kilometers
Mars	228 million kilometers

(a)

Put these three rocks in order from **smallest to largest**.

- A C → A → B
- B B → A → C
- C A → B → C
- D A → C → B



(d)