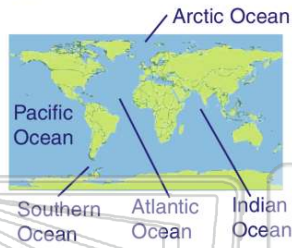




Name \_\_\_\_\_ Class \_\_\_\_\_ Date \_\_\_\_\_

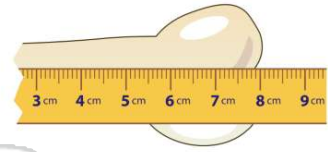
1 How many **oceans** are on Earth?

- A 5
- B 2
- C 3
- D 7



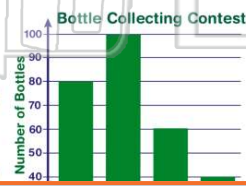
2 What is the **length** of this fossil?

- A 8 cm
- B 18 cm
- C 5 cm
- D 3 cm



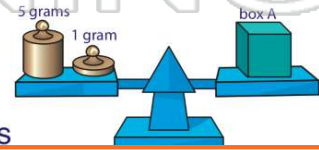
3 Which **class** collected the **most** glass bottles?

- A Mrs. Smith's
- B Miss Lee's
- C Mrs. David's



4 How much does **Box A** weigh?

- A 6 grams
- B 1 gram
- C 5 grams
- D 11 grams



## PREVIEW

Please [Sign In](#) or [Sign Up](#) to download the printable version of this worksheet

7

- A eraser
- B paperclip
- C piece of wood
- D plastic button

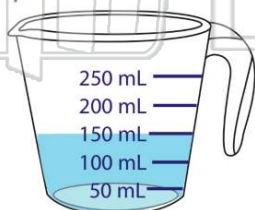
plastic button	no
paperclip	yes

- C block #3
- D block #4

Block #2	70 grams
Block #3	30 grams

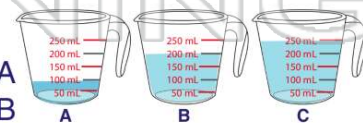
9 How much **water** is in this measuring cup?

- A 50 mL
- B 100 mL
- C 150 mL
- D 250 mL



10 Which measuring cup is holding **200 mL** of water?

- A Cup A
- B Cup B
- C Cup C
- D none of the cups

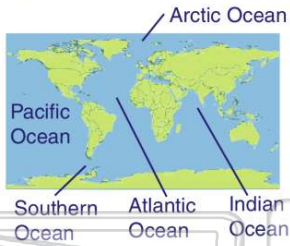




## ANSWER KEY

How many **oceans** are on Earth?

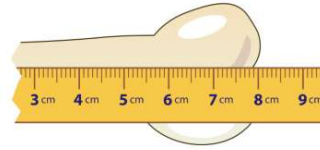
- A 5
- B 2
- C 3
- D 7



(a)

What is the **length** of this fossil?

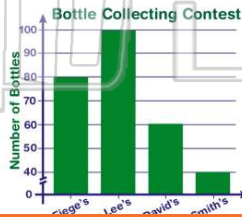
- A 8 cm
- B 18 cm
- C 5 cm
- D 3 cm



(a)

Which **class** collected the **most** glass bottles?

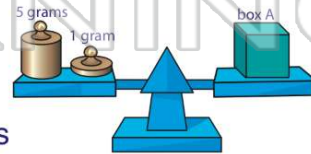
- A Mrs. Smith's
- B Miss Lee's
- C Mrs. David's
- D Mrs. Fiege's



(b)

How much does **Box A** weigh?

- A 6 grams
- B 1 gram
- C 5 grams
- D 11 grams



(a)



## PREVIEW

Please [Sign In](#) or [Sign Up](#) to download the printable version of this worksheet

How much **water** is in this measuring cup?

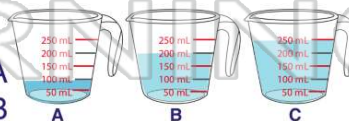
- A 50 mL
- B 100 mL
- C 150 mL
- D 250 mL



(c)

Which measuring cup is holding **200 mL** of water?

- A Cup A
- B Cup B
- C Cup C
- D none of the cups



(b)