



Name _____ Class _____ Date _____

1 Stars give off _____.

- A noise
- B electricity
- C sound
- D light



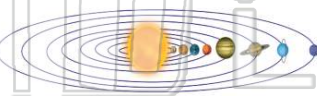
2 Which of the following is a **star**?

- A Earth
- B the Sun
- C Mars
- D an asteroid



3 What is a **planet**?

- A a large ball of cool gases
- B a small rock in space
- C a large object that moves



4 To _____ means **to travel in a path** around something.

- A spin
- B orbit
- C rotate

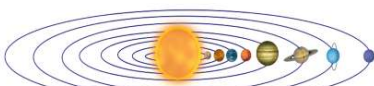


PREVIEW

Please [Sign In](#) or [Sign Up](#) to download the printable version of this worksheet

7 _____

- A 10
- B 8
- C 5
- D 19

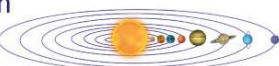


- B a microscope
- C a hand lens
- D a balance



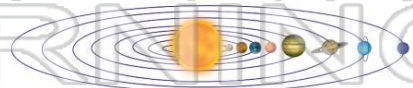
9 What is the name that is given to the **Sun**, the **planets**, their **moons**, and other objects in space near the Sun?

- A asteroid belt
- B solar system
- C a satellite
- D constellation



10 What does this picture show?

- A our solar system
- B a satellite
- C the asteroid belt
- D Earth's atmosphere

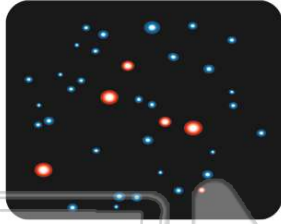




ANSWER KEY

Stars give off _____.

- A noise
- B electricity
- C sound
- D light



(d)

Which of the following is a **star**?

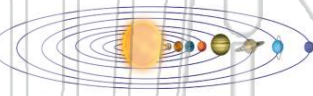
- A Earth
- B the Sun
- C Mars
- D an asteroid



(b)

What is a **planet**?

- A a large ball of cool gases
- B a small rock in space
- C a large object that moves around the Sun



(c)

To _____ means **to travel in a path** around something.

- A spin
- B orbit
- C rotate
- D axis



(b)



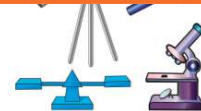
PREVIEW

Please [Sign In](#) or [Sign Up](#) to download the printable version of this worksheet

- B 8
- C 5
- D 19




- C a hand lens
- D a balance



What is the name that is given to the **Sun**, the **planets**, their **moons**, and other objects in space near the Sun?

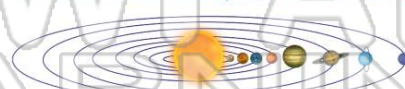
- A asteroid belt
- B solar system
- C a satellite
- D constellation



(b)

What does this picture show?

- A our solar system
- B a satellite
- C the asteroid belt
- D Earth's atmosphere



(a)