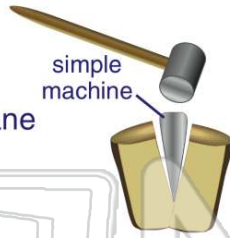




Name _____ Class _____ Date _____

1 What **simple machine** is shown in this picture?

- A a pulley
- B an inclined plane
- C a wedge
- D a screw



2 What does a **wedge** do?

- A pushes things apart
- B pushes things together
- C fastens things together
- D helps lift heavy things



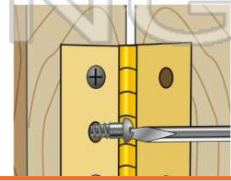
3 A **wedge** is often used to _____.

- A spilt or chop wood
- B carry wood
- C burn wood



4 What is a **screw** used for?

- A to move a load
- B to hold things together
- C to push things



PREVIEW

Please [Sign In](#) or [Sign Up](#) to download the printable version of this worksheet

7
A _____ is a **simple machine** that is used to **lift things**.

- B a slide
- C a seesaw
- D monkey bars



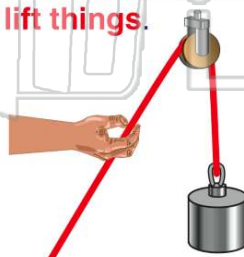
8
A _____ is a **simple machine** that is used to **lift things**.

- B lever
- C screw
- D wheel and axle



9 A _____ is a **simple machine** that is used to **lift things**.

- A pulley
- B wedge
- C lever
- D screw



10 What **simple machine** is used to **raise and lower a flag** on a flagpole?

- A a wedge
- B a lever
- C a pulley
- D wheel and axle

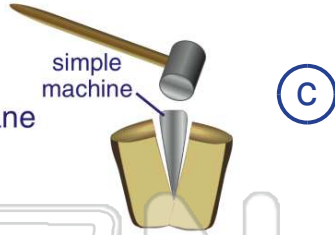




ANSWER KEY

What **simple machine** is shown in this picture?

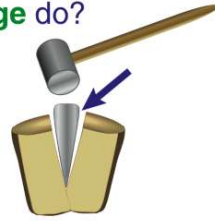
- A** a pulley
- B** an inclined plane
- C** a wedge
- D** a screw



(c)

What does a **wedge** do?

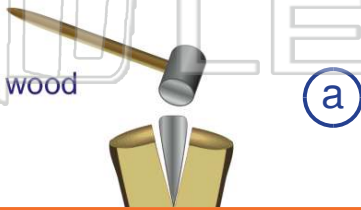
- A** pushes things apart
- B** pushes things together
- C** fastens things together
- D** helps lift heavy things



(a)

A **wedge** is often used to _____.

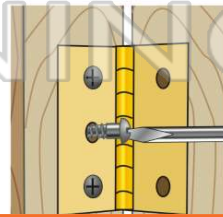
- A** split or chop wood
- B** carry wood
- C** burn wood
- D** lift wood



(a)

What is a **screw** used for?

- A** to move a load
- B** to hold things together
- C** to push things apart



(b)



PREVIEW

Please [Sign In](#) or [Sign Up](#) to download the printable version of this worksheet

- C** a seesaw
- D** monkey bars

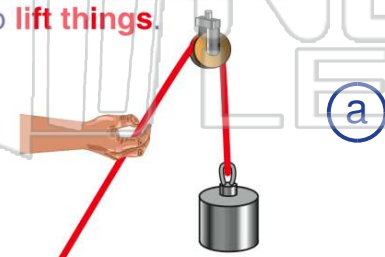


- C** screw
- D** wheel and axle



A _____ is a **simple machine** that is used to **lift things**.

- A** pulley
- B** wedge
- C** lever
- D** screw



(a)

What **simple machine** is used to **raise and lower a flag** on a flagpole?

- A** a wedge
- B** a lever
- C** a pulley
- D** wheel and axle



(c)