



Name _____ Class _____ Date _____

1 Which is a **living** thing?

- A a rock
- B soil
- C a plant
- D the Sun



2 Which is a job of the **roots** of a plant?

- A to take in sunshine
- B to keep the plant in the ground
- C to grow the flowers
- D to make the flowers smell nice



3 What do **roots** take in **from the soil** that a plant needs to grow healthy and strong?

- A sunshine
- B soil pieces



4 What **part of the plant** is the arrow pointing to in the picture below?

- A roots
- B stem

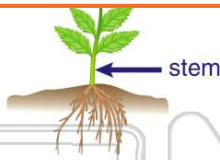


PREVIEW

Please [Sign In](#) or [Sign Up](#) to download the printable version of this worksheet

7

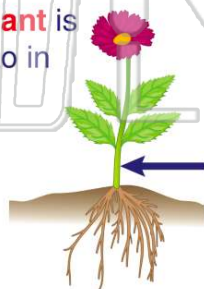
- A seed
- B sky
- C flower
- D roots



- B to make food for the plant
- C to keep a plant standing up tall
- D to make flowers smell nice

9 What **part of the plant** is the **arrow** pointing to in the picture?

- A roots
- B stem
- C flower
- D leaves



10 Green plants **make their own food**. **Where** is food for a green plant made?

- A in the flower
- B in the stem
- C in the roots
- D in the leaves





ANSWER KEY

Which is a **living** thing?

- A** a rock
- B** soil
- C** a plant
- D** the Sun



(C)

Which is a job of the **roots** of a plant?

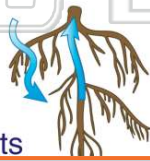
- A** to take in sunshine
- B** to keep the plant in the ground
- C** to grow the flowers
- D** to make the flowers smell nice



(b)

What do **roots** take in **from the soil** that a plant needs to grow healthy and strong?

- A** sunshine
- B** soil pieces
- C** water and nutrients



(C)

What **part of the plant** is the arrow pointing to in the picture below?

- A** roots
- B** stem
- C** flower



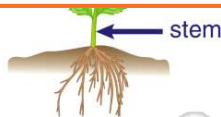
(a)



PREVIEW

Please [Sign In](#) or [Sign Up](#) to download the printable version of this worksheet

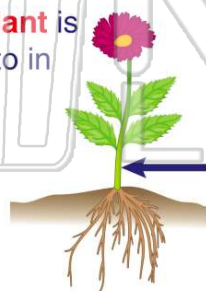
- B** sky
- C** flower
- D** roots



- C** to keep a plant standing up tall
- D** to make flowers smell nice

What **part of the plant** is the **arrow** pointing to in the picture?

- A** roots
- B** stem
- C** flower
- D** leaves



(b)

Green plants **make their own food**. **Where** is food for a green plant made?

- A** in the flower
- B** in the stem
- C** in the roots
- D** in the leaves



(d)