





Name \_\_\_\_\_ Class \_\_\_\_\_ Date \_\_\_\_\_

1 This picture shows that plants' \_\_\_\_\_ come in many **different shapes** and **sizes**.



A leaves    C seeds  
B roots    D stems

2 What **part of the plant** is the **arrow** pointing to in the picture below?




A roots  
B stem  
C flower  
D leaves

3 This picture shows that plants' \_\_\_\_\_ come in many **different colors** and **sizes**.



A flowers  
B stems

4 What is the job of the **flower** of a plant?



A to keep the plant in the ground  
B to make seeds

5



**PREVIEW**

Please [Sign In](#) or [Sign Up](#) to download the printable version of this worksheet

6

B seeds  
C noise  
D food




8

B rain  
C bees  
D soil




9 What part of the plant makes **bees** want to land on a plant?

A the flower  
B the stem  
C the leaves  
D the roots



10 Every \_\_\_\_\_ is a **tiny plant** with leaves, stems, and root parts.

A flower  
B leaf  
C seed  
D root





## ANSWER KEY

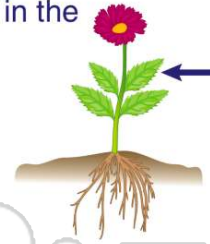
This picture shows that plants' \_\_\_\_\_ come in many **different shapes** and **sizes**.



(a)

- A leaves    C seeds
- B roots    D stems

What **part of the plant** is the **arrow** pointing to in the picture below?



(d)

- A roots
- B stem
- C flower
- D leaves

This picture shows that plants' \_\_\_\_\_ come in many **different colors** and **sizes**.



(a)

- A flowers
- B stems
- C roots

What is the job of the **flower** of a plant?



(b)

- A to keep the plant in the ground
- B to make seeds
- C to make the plant turn green



## PREVIEW

Please [Sign In](#) or [Sign Up](#) to download the printable version of this worksheet

- C noise
- D food



- C bees
- D soil



What part of the plant makes **bees** want to land on a plant?



(a)

- A the flower
- B the stem
- C the leaves
- D the roots

Every \_\_\_\_\_ is a **tiny plant** with leaves, stems, and root parts.



(c)

- A flower
- B leaf
- C seed
- D root