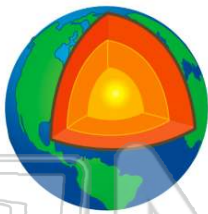




Name _____ Class _____ Date _____

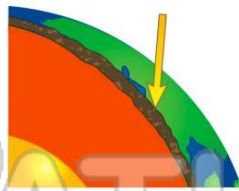
1 How many **main layers** is the **earth** made up of?

A one main layer
B three main layers
C two main layers
D ten main layers



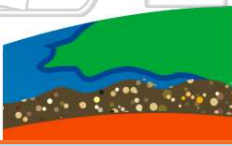
2 We live on the **outer layer** of the **earth** called the _____.

A outer core
B core
C mantle
D crust




3 What is the **crust** of the earth made of?

A many different rocks
B shells



4 **Under the earth's crust** is the layer called the _____.

A mantle
B outer crust
C core



5



PREVIEW

Please [Sign In](#) or [Sign Up](#) to download the printable version of this worksheet

B fire
C metal
D lava




A liquid
B solid
C melted
D water




9 The **outer section** of the **earth's core** is _____.

A solid rock
B cooled liquid
C hot, thick liquid
D thick rock



10 _____ are the many different solid features formed on top of the earth's **crust**.

A Resources
B Mountains
C Layers
D Landforms

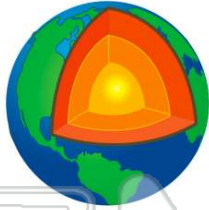




ANSWER KEY

How many **main layers** is the **earth** made up of?

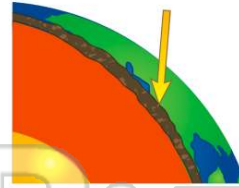
- A** one main layer
- B** three main layers
- C** two main layers
- D** ten main layers



(b)

We live on the **outer layer** of the **earth** called the _____.

- A** outer core
- B** core
- C** mantle
- D** crust



(d)

What is the **crust** of the earth made of?

- A** many different rocks
- B** shells
- C** sand
- D** lava



(a)

Under the earth's crust is the layer called the _____.

- A** mantle
- B** outer crust
- C** core
- D** magma



(a)



PREVIEW

Please [Sign In](#) or [Sign Up](#) to download the printable version of this worksheet

- C** metal
- D** lava



- A** liquid
- B** solid
- C** melted
- D** water



The **outer section** of the **earth's core** is _____.

- A** solid rock
- B** cooled liquid
- C** hot, thick liquid
- D** thick rock



(c)

_____ are the many different solid features formed on top of the earth's **crust**.

- A** Resources
- B** Mountains
- C** Layers
- D** Landforms



(d)