



Name _____ Class _____ Date _____

1 _____ means **growing**. The moon can be described as this when it becomes **more visible** from earth during certain moon phases.

- A Waxing
- B Waning
- C Withering
- D Wilting



2 _____ means **shrinking**. The moon can be described as this when it becomes **less visible** from earth during certain moon phases.

- A Waxing
- B Waning
- C Weathering
- D Winking



3 During the _____ phase of the moon, only a **sliver** of the moon's surface can be seen from earth.

- A new moon
- B full moon
- C waxing or waning



4 The _____ **phase of the moon** is when the moon looks half full.

- A first or last quarter
- B new moon
- C half moon



PREVIEW


Please [Sign In](#) or [Sign Up](#) to download the printable version of this worksheet

7 A p a c

A a comet
B the Sun
C the moon
D Mercury

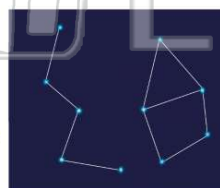


- B A planet
- C An asteroid
- D A star




9 What do we call a group of stars that make a **pattern** in the night sky?

- A a milky way
- B a cluster
- C a constellation
- D a meteor shower



10 What is the name of this popular **constellation**?

- A Orion's Belt
- B The Bear
- C The Big Dipper
- D The Spoon





ANSWER KEY

_____ means **growing**. The moon can be described as this when it becomes **more visible** from earth during certain moon phases.

- A Waxing
- B Waning
- C Withering
- D Wilting



(a)

_____ means **shrinking**. The moon can be described as this when it becomes **less visible** from earth during certain moon phases.


- A Waxing
- B Waning
- C Weathering
- D Winking



(b)

During the _____ phase of the moon, only a **sliver** of the moon's surface can be seen from earth.

- A new moon
- B full moon
- C waxing or waning crescent



(c)

The _____ **phase of the moon** is when the moon looks half full.

- A first or last quarter
- B new moon
- C half moon
- D waning crescent



(a)



PREVIEW

Please [Sign In](#) or [Sign Up](#) to download the printable version of this worksheet

- A the Sun
- B the Sun
- C the moon
- D Mercury

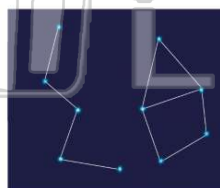


- C An asteroid
- D A star



What do we call a group of stars that make a **pattern** in the night sky?


- A a milky way
- B a cluster
- C a constellation
- D a meteor shower



(c)

What is the name of this popular **constellation**?

- A Orion's Belt
- B The Bear
- C The Big Dipper
- D The Spoon



(c)