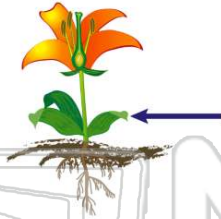




Name _____ Class _____ Date _____

1 What is the **arrow** on the diagram pointing to on the plant?

- A leaf
- B stem
- C roots
- D flower



2 Plant _____ have many jobs. One job is to **take in sunshine**, which the plant needs to make food and to live.

- A leaves
- B stems
- C roots
- D root hairs



3 What do **leaves** have in them which allow air and water to move in and out of the plant?

- A tiny cuts
- B big pockets



4 Leaves contain _____, which is the **green substance** that gives green plants their color.

- A nutrients
- B carbon dioxide



PREVIEW

Please [Sign In](#) or [Sign Up](#) to download the printable version of this worksheet

7 What do plants take in from the soil during the process of **photosynthesis**?

- A nutrients
- B oxygen
- C carbon dioxide
- D water

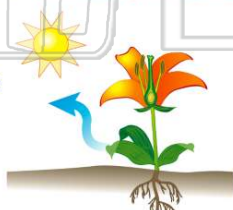


- A true
- B false



9 What do plants release into the air during the process of **photosynthesis**?

- A oxygen
- B carbon dioxide
- C water
- D helium



10 The main job of the _____ of a plant is to **make seeds**. New plants grow from seeds.

- A flower
- B stem
- C leaves
- D roots

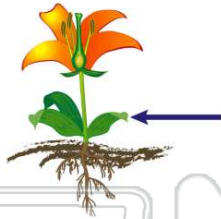




ANSWER KEY

What is the **arrow** on the diagram pointing to on the plant?

- A leaf
- B stem
- C roots
- D flower



(a)

Plant _____ have many jobs. One job is to **take in sunshine**, which the plant needs to make food and to live.

- A leaves
- B stems
- C roots
- D root hairs



(a)

What do **leaves** have in them which allow air and water to move in and out of the plant?

- A tiny cuts
- B big pockets
- C large stripes
- D small openings



(d)

Leaves contain _____, which is the **green substance** that gives green plants their color.

- A nutrients
- B carbon dioxide
- C chlorophyll
- D oxygen



(c)



PREVIEW

Please [Sign In](#) or [Sign Up](#) to download the printable version of this worksheet

- A nutrients
- B oxygen
- C carbon dioxide
- D water




B false



What do plants release into the air during the process of **photosynthesis**?

- A oxygen
- B carbon dioxide
- C water
- D helium



(a)

The main job of the _____ of a plant is to **make seeds**. New plants grow from seeds.

- A flower
- B stem
- C leaves
- D roots



(a)