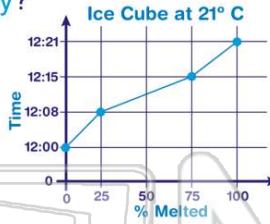




Name _____ Class _____ Date _____

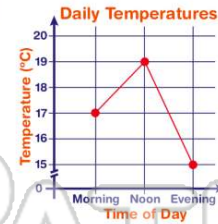
1 How long did it take the ice cube to **melt completely**?

- A 8 minutes
- B 15 minutes
- C 21 minutes
- D 18 minutes



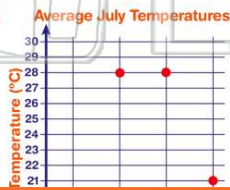
2 How much **warmer** was it in the morning at your school than in the evening?

- A 2°C
- B 15°C
- C 19°C
- D 5°C



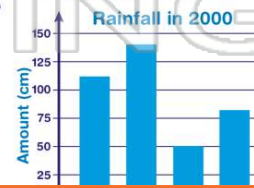
3 What was the **average temperature** in **Houston, Texas** during the month of **July**?

- A 29°C
- B 20°C



4 What **city** had the **most rainfall** in the year 2000?

- A Lakeland
- B Pomerville
- C Sun City
- D Bear Lake



5
It
o
it

A
E
C
D

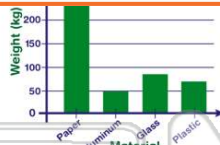


PREVIEW

Please [Sign In](#) or [Sign Up](#) to download the printable version of this worksheet

7

A 90 kg
B 300 kg
C 70 kg
D 50 kg



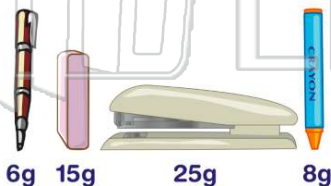
10 How many **milliliters of water** do you need to conduct this experiment?

- A Mrs. Grove's
- B Miss Petty's
- C Mrs. Meyer's
- D Mr. O'Brien's



9 Which object **weighed the most**?

- A pen
- B eraser
- C stapler
- D crayon



- A 35 milliliters
- B 15 milliliters
- C 5 milliliters
- D 25 milliliters

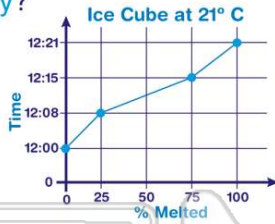
Items Needed for Experiment	
<input type="checkbox"/>	Spoon
<input type="checkbox"/>	Cup
<input type="checkbox"/>	25 milliliters of water
<input type="checkbox"/>	handful of dirt



ANSWER KEY

How long did it take the ice cube to **melt completely**?

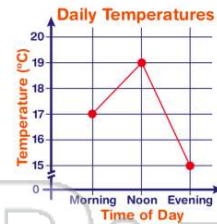
- A 8 minutes
- B 15 minutes
- C 21 minutes
- D 18 minutes



(C)

How much **warmer** was it in the morning at your school than in the evening?

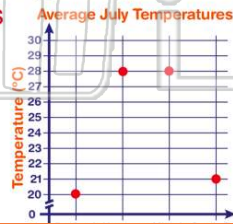
- A 2°C
- B 15°C
- C 19°C
- D 5°C



(a)

What was the **average temperature** in **Houston, Texas** during the month of **July**?

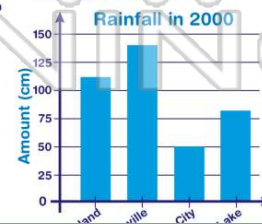
- A 29°C
- B 20°C
- C 21°C



(d)

What **city** had the **most rainfall** in the year 2000?

- A Lakeland
- B Pominville
- C Sun City
- D Bear Lake



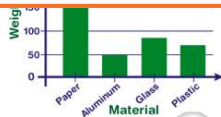
(b)



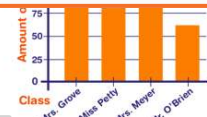
PREVIEW

Please [Sign In](#) or [Sign Up](#) to download the printable version of this worksheet

- B 300 kg
- C 70 kg
- D 50 kg

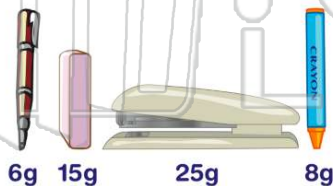


- A Mrs. Groves
- B Miss Petty's
- C Mrs. Meyer's
- D Mr. O'Brien



Which object **weighed the most**?

- A pen
- B eraser
- C stapler
- D crayon



(C)

How many **milliliters of water** do you need to conduct this experiment?

- A 35 milliliters
- B 15 milliliters
- C 5 milliliters
- D 25 milliliters

Items Needed for Experiment	
<input type="checkbox"/>	Spoon
<input type="checkbox"/>	Cup
<input type="checkbox"/>	25 milliliters of water
<input type="checkbox"/>	handful of dirt

(d)