



Name _____ Class _____ Date _____

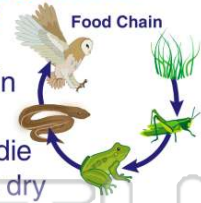
1 What is a living thing that **eats both plants and animals** called?

- A herbivore
- B omnivore
- C carnivore
- D plant



2 Living things need **energy** in order to survive. **How is energy passed between living things?**

- A through a food chain
- B when it rains
- C only when animals die
- D when the ground is dry



3 **Food chains** include interacting together.

- A producers and consumers
- B only producers



4 Which is an example of a **food chain**?

- A rain falling from the sky
- B an owl eats a mouse that ate a plant



PREVIEW

Please [Sign In](#) or [Sign Up](#) to download the printable version of this worksheet

7 **B** predator
C omnivore
D herbivore

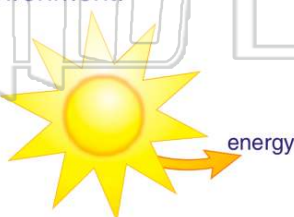


- B soil
- C saltwater
- D food energy




9 **Energy** is often given off as heat into the environment.

- A true
- B false



10 A(n) _____ is the **energy flow** within a community and is made up of **more than one food chain**.

- A food web
- B food chain
- C ecosystem
- D environment





ANSWER KEY

What is a living thing that **eats both plants and animals** called?

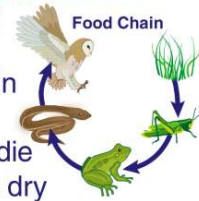
- A herbivore
- B omnivore
- C carnivore
- D plant



(b)

Living things need **energy** in order to survive. **How is energy passed between living things?**

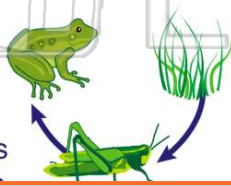
- A through a food chain
- B when it rains
- C only when animals die
- D when the ground is dry



(a)

Food chains include interacting together.

- A producers and consumers
- B only producers
- C only consumers
- D non-living things



(a)

Which is an example of a **food chain**?

- A rain falling from the sky
- B an owl eats a mouse that ate a plant
- C a plant growing
- D the sun rising in the morning



(b)



PREVIEW

Please [Sign In](#) or [Sign Up](#) to download the printable version of this worksheet

- C omnivore
- D herbivore




- C saltwater
- D food energy



Energy is often given off as heat into the environment.

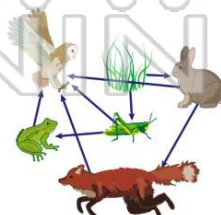
- A true
- B false



(a)

A(n) _____ is the **energy flow** within a community and is made up of **more than one food chain**.

- A food web
- B food chain
- C ecosystem
- D environment



(a)