



Name _____ Class _____ Date _____

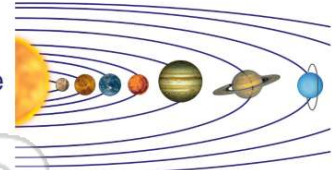
1 **Saturn** has _____ made of ice and rock which circle the planet.

- A craters
- B layers
- C moons
- D rings



2 What is the **seventh planet** from the Sun?

- A Pluto
- B Neptune
- C Uranus
- D Saturn



3 **Uranus** has at least 27 moons.

- A true
- B false



4 The **eighth planet** from the Sun is _____

- A Jupiter
- B Pluto
- C Mercury



5



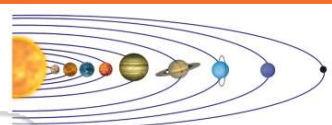
PREVIEW

7 Please [Sign In](#) or [Sign Up](#) to download the printable version of this worksheet

- C planet
- D asteroid

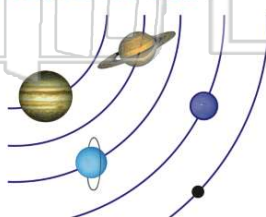


- A longer
- B shorter
- C closer
- D faster



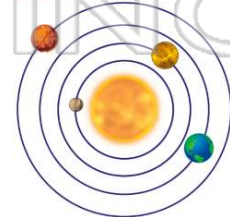
9 Which outer planet takes the **longest time** to orbit the Sun?

- A Neptune
- B Uranus
- C Jupiter
- D Saturn



10 Which planet takes the **shortest time** to orbit the Sun?

- A Mercury
- B Mars
- C Saturn
- D Earth





ANSWER KEY

Saturn has _____ made of ice and rock which circle the planet.

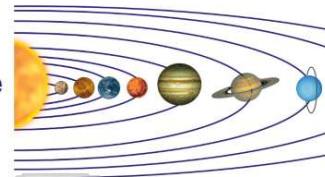
- A craters
- B layers
- C moons
- D rings



(d)

What is the **seventh planet** from the Sun?

- A Pluto
- B Neptune
- C Uranus
- D Saturn



(c)

Uranus has at least 27 moons.


- A true
- B false



(a)

The **eighth planet** from the Sun is _____.

- A Jupiter
- B Pluto
- C Mercury
- D Neptune



(d)



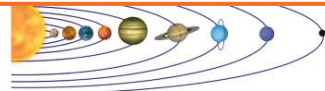
PREVIEW

Please [Sign In](#) or [Sign Up](#) to download the printable version of this worksheet

D asteroid

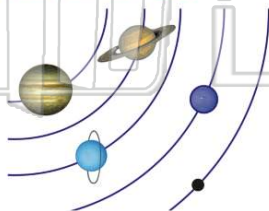


- B shorter
- C closer
- D faster



Which outer planet takes the **longest time** to orbit the Sun?

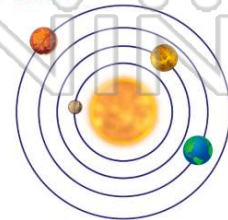
- A Neptune
- B Uranus
- C Jupiter
- D Saturn



(a)

Which planet takes the **shortest time** to orbit the Sun?

- A Mercury
- B Mars
- C Saturn
- D Earth



(a)