





Name \_\_\_\_\_ Class \_\_\_\_\_ Date \_\_\_\_\_

1 **Earth** is made up of **three** main layers: \_\_\_\_\_.



**A** crust, mantle, and core  
**B** crust, mantle, and sediment  
**C** mantle, core, and lava  
**D** crust, core, and magma

2 What is the **innermost layer** of the earth?




**A** magma  
**B** core  
**C** mantle  
**D** crust

3 The \_\_\_\_\_ is packed tightly so it is mostly **solid**.



**A** lava  
**B** magma  
**C** outer core  
**D** inner core

4 What is the **outer core** of the earth made up of?



**A** hot, watery liquid  
**B** cool, solid liquid  
**C** very hot, dense liquid




## PREVIEW

Please [Sign In](#) or [Sign Up](#) to download the printable version of this worksheet

7


\_\_\_\_\_ and bedrock.



**A** loam      **C** humans  
**B** soil      **D** mulch


8

\_\_\_\_\_ the weather in that area.



**B** the type of plants that grow in that area  
**C** the temperature in that area  
**D** how cold it gets in that area

9 What does **all soil** contain?



**A** air and water only  
**B** humus and air only  
**C** pieces of weathered rock, humus, air, and water  
**D** loam

10 Soil is **extremely important**. Which sentence supports this fact?



**A** Animals need soil.  
**B** Soil keeps plants warm.  
**C** Soil can be broken down.  
**D** Soil supports all life on earth.



## ANSWER KEY

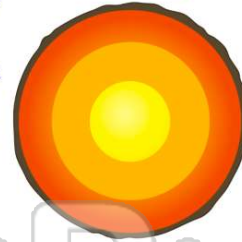
Earth is made up of **three** main layers: \_\_\_\_\_.



- A** crust, mantle, and core
- B** crust, mantle, and sediment
- C** mantle, core, and lava
- D** crust, core, and magma

(a)

What is the **innermost layer** of the earth?



- A** magma
- B** core
- C** mantle
- D** crust

(b)

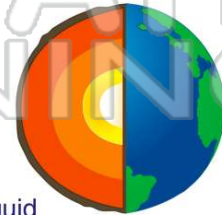
The \_\_\_\_\_ is packed tightly so it is mostly **solid**.



- A** lava
- B** magma
- C** outer core
- D** inner core

(d)

What is the **outer core** of the earth made up of?



- A** hot, watery liquid
- B** cool, solid liquid
- C** very hot, dense liquid
- D** cool and thick liquid

(c)



## PREVIEW

Please [Sign In](#) or [Sign Up](#) to download the printable version of this worksheet

- A** loam
- B** soil
- C** humans
- D** mulch



- grow in that area
- C** the temperature in that area
- D** how cold it gets in that area



What does **all soil** contain?

- A** air and water only
- B** humus and air only
- C** pieces of weathered rock, humus, air, and water
- D** loam



(c)

Soil is **extremely important**. Which sentence supports this fact?

- A** Animals need soil.
- B** Soil keeps plants warm.
- C** Soil can be broken down.
- D** Soil supports all life on earth.



(d)