




Name _____ Class _____ Date _____


1 _____ of the earth's surface is covered by **water**.

A One-third
B Three-quarters
C One-half
D All




2 What is **freshwater**?

A water containing a lot of salt
B cold water containing fish
C water containing only a small amount of salt
D water in the ocean




3 What percentage of water on earth is **usable freshwater** found in groundwater, lakes, rivers, and streams?

A 1%
B 25%



4 _____ is **freshwater beneath** the earth's surface.

A Groundwater
B A lake
C A pond
D A river



5




PREVIEW

Please [Sign In](#) or [Sign Up](#) to download the printable version of this worksheet


7 _____ and dishes

B used to swim in
C used for drinking and for watering crops
D used to cool off with




9 Throughout the **water cycle**, water can be solid, liquid, or _____.

A gas
B ice
C rain
D snow




A rainfall amount
B water cycle
C humidity level
D air pressure



10 The **sun** powers the water cycle, because _____ is what keeps the cycle going.

A cold
B rain
C heat
D snow





ANSWER KEY

_____ of the earth's surface is covered by water.

- A One-third
- B Three-quarters
- C One-half
- D All



(b)

What is **freshwater**?

- A water containing a lot of salt
- B cold water containing fish
- C water containing only a small amount of salt
- D water in the ocean



(c)

What percentage of water on earth is **usable freshwater** found in groundwater, lakes, rivers, and streams?

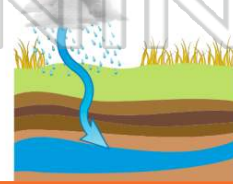
- A 1%
- B 25%
- C 50%



(a)

_____ is **freshwater beneath** the earth's surface.

- A Groundwater
- B A lake
- C A pond
- D A river



(a)



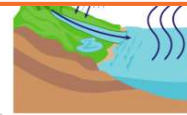
PREVIEW

Please [Sign In](#) or [Sign Up](#) to download the printable version of this worksheet

- B used to swim in
- C used for drinking and for watering crops
- D used to cool off with



- A rainfall amount
- B water cycle
- C humidity level
- D air pressure



Throughout the **water cycle**, water can be solid, liquid, or _____.

- A gas
- B ice
- C rain
- D snow



(a)

The **sun powers** the water cycle, because _____ is what keeps the cycle going.

- A cold
- B rain
- C heat
- D snow



(c)