



Name _____ Class _____ Date _____

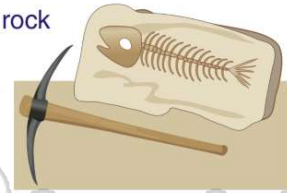
1 A _____ is **remains** or **evidence** of a once-living organism from **long ago**.

- A sediment
- B picture
- C rock
- D fossil



2 What kind of **rock** do **fossils** form in?

- A sedimentary rock
- B sand
- C igneous rock
- D granite



3 There are **several steps** an organism takes when **becoming a fossil**. The **first step** to becoming a fossil is _____.

- A the animal has babies
- B the animal drinks



4 **After dying**, which of the following would be the next step of this fish **becoming** a fossil?

- A body changes into rock
- B fossil is exposed
- C animal becomes sick
- D dead body settles to the



5



PREVIEW

Please [Sign In](#) or [Sign Up](#) to download the printable version of this worksheet

7

harden into _____.

- A sand
- B rock
- C salt
- D soil



- A appearing above ground
- B becoming buried again
- C sinking deeper in the rock layers
- D melting under the earth's surface

9

A **space in a rock** which is in the **shape of an animal** that once lived on earth is a fossil called a(n) _____.

- A cast
- B amber
- C mold
- D bone fragment



10

What **type of fossil** is made when the mold of an animal in rock is **filled** in with other rock material?

- A amber fossil
- B a mold
- C a cast
- D an imprint





ANSWER KEY

A _____ is **remains** or **evidence** of a once-living organism from **long ago**.

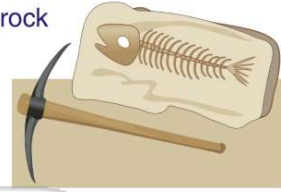
- A sediment
- B picture
- C rock
- D fossil



(d)

What kind of **rock** do **fossils form** in?

- A sedimentary rock
- B sand
- C igneous rock
- D granite



(a)

There are **several steps** an organism takes when **becoming a fossil**. The **first step** to becoming a fossil is _____.

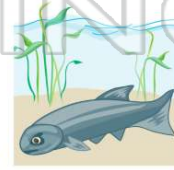
- A the animal has babies
- B the animal drinks
- C the animal dies



(c)

After dying, which of the following would be the next step of this fish **becoming** a fossil?

- A body changes into rock
- B fossil is exposed
- C animal becomes sick
- D dead body settles to the bottom of a water body



(d)



PREVIEW

Please [Sign In](#) or [Sign Up](#) to download the printable version of this worksheet

- A sand
- B rock
- C salt
- D soil



- A appearing above ground
- B becoming buried again
- C sinking deeper in the rock layers
- D melting under the earth's surface

A **space in a rock** which is in the **shape of an animal** that once lived on earth is a fossil called a(n) _____.

- A cast
- B amber
- C mold
- D bone fragment



(c)

What **type of fossil** is made when the mold of an animal in rock is **filled** in with other rock material?

- A amber fossil
- B a mold
- C a cast
- D an imprint



(c)