



Name _____ Class _____ Date _____

1 Ninety-seven percent of the water on earth is saltwater, and the **rest** is freshwater. **What percentage of the earth's water is freshwater?**

- A 97%
- B 13%
- C 23%
- D 3%



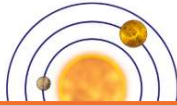
2 Earth experiences different hours of daylight throughout the year. **Which season has the longest hours of daylight?**

- A winter
- B spring
- C summer
- D fall



3 Planet Earth's average distance from the Sun is 149,600,000 km while Venus' average distance from the Sun is 108,200,000 km. **How many more kilometers is Earth from the Sun than Venus?**

- A 41,400,000 km
- B 41,000 km



4 The earth takes **24 hours** to complete **one rotation**. How many times does the earth rotate completely in **one week**?

- A 4 times
- B 5 times
- C 7 times




PREVIEW

Please [Sign In](#) or [Sign Up](#) to download the printable version of this worksheet

7

A 119 km/hr
B 91 km/hr
C 19 km/hr
D 100 km/hr



- B 3.1 seconds
- C 4.1 seconds
- D 3.0 seconds

Ball A		12.3 seconds
Ball B		9.2 seconds

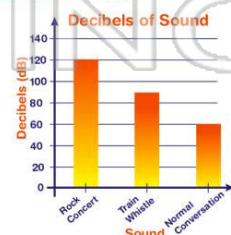
9 Let's say a wind turbine can generate **225 kilowatts** of electrical power. How many kilowatts could **three** of these wind turbines generate **all together**?

- A 675 kilowatts
- B 450 kilowatts
- C 700 kilowatts
- D 625 kilowatts



10 Which of those listed on the bar graph is the **loudest sound** to hear?

- A rock concert
- B jet plane
- C train whistle
- D normal conversation





ANSWER KEY

Ninety-seven percent of the water on earth is saltwater, and the **rest** is freshwater. **What percentage of the earth's water is freshwater?**

- A 97%
- B 13%
- C 23%
- D 3%



(d)

Earth experiences different hours of daylight throughout the year. **Which season has the longest hours of daylight?**

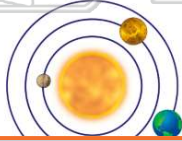
- A winter
- B spring
- C summer
- D fall



(c)

Planet Earth's average distance from the Sun is 149,600,000 km while Venus' average distance from the Sun is 108,200,000 km. **How many more kilometers is Earth from the Sun than Venus?**

- A 41,400,000 km
- B 41,000 km
- C 41,000,000 km
- D



(a)

The earth takes **24 hours** to complete **one rotation**. How many times does the earth rotate completely in **one week**?

- A 4 times
- B 5 times
- C 7 times
- D 14 times



(c)



PREVIEW

Please [Sign In](#) or [Sign Up](#) to download the printable version of this worksheet

- B 91 km/hr
- C 19 km/hr
- D 100 km/hr



- C 4.1 seconds
- D 3.0 seconds

Ball B  9.2 seconds

Let's say a wind turbine can generate **225 kilowatts** of electrical power. How many kilowatts could **three** of these wind turbines generate **all together**?

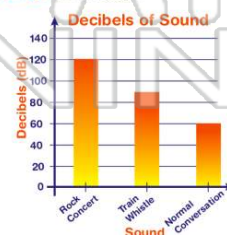
- A 675 kilowatts
- B 450 kilowatts
- C 700 kilowatts
- D 625 kilowatts



(a)

Which of those listed on the bar graph is the **loudest sound** to hear?

- A rock concert
- B jet plane
- C train whistle
- D normal conversation



(a)