



Name _____ Class _____ Date _____

1 The _____ phase of the moon occurs when the side of the moon visible to us on earth appears to be **half-full on its right side.**

- A waxing gibbous
- B last quarter
- C full moon
- D first quarter



2 What is the **largest planet** in our solar system?

- A Mars
- B Jupiter
- C Mercury
- D Saturn



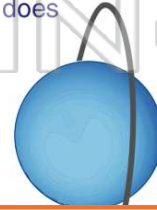
3 The **rings of Saturn** are made of _____.

- A gas
- B soil and water
- C sand
- D ice and rock



4 How many **moons** does **Uranus** have?

- A 2
- B 6
- C 26
- D 62



5

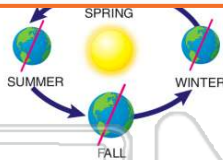


PREVIEW

Please [Sign In](#) or [Sign Up](#) to download the printable version of this worksheet

7

- A Rain
- B Seasons
- C Wind storms
- D Thunderstorms



- A winter
- B summer
- C spring
- D fall



9

The **eighth planet** from the Sun is _____ which is made up of **several different types of gases.**

- A Saturn
- B Neptune
- C Pluto
- D Jupiter



10

Pluto is a _____.

- A plant
- B dwarf planet
- C comet
- D moon





ANSWER KEY

The _____ phase of the moon occurs when the side of the moon visible to us on earth appears to be **half-full on its right side.**

- A waxing gibbous
- B last quarter
- C full moon
- D first quarter



(d)

What is the **largest planet** in our solar system?


- A Mars
- B Jupiter
- C Mercury
- D Saturn



(b)

The **rings of Saturn** are made of _____.

- A gas
- B soil and water
- C sand
- D ice and rock



(d)

How many **moons** does **Uranus** have?

- A 2
- B 6
- C 26
- D 62



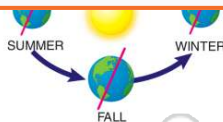
(c)



PREVIEW

Please [Sign In](#) or [Sign Up](#) to download the printable version of this worksheet

- A _____
- B Seasons
- C Wind storms
- D Thunderstorms




- A winter
- B summer
- C spring
- D fall



The **eighth planet** from the Sun is _____ which is made up of **several different types of gases.**

- A Saturn
- B Neptune
- C Pluto
- D Jupiter



(b)

Pluto is a _____.

- A plant
- B dwarf planet
- C comet
- D moon



(b)