



Name _____ Class _____ Date _____

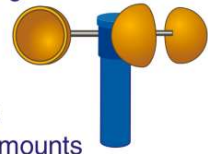
1 A(n) _____ is used to measure air pressure.

- A anemometer
- B wind vane
- C hygrometer
- D barometer



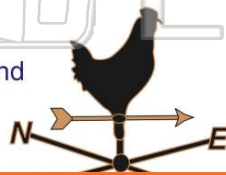
2 Why would a meteorologist use an anemometer?

- A to measure the outside temperature
- B to measure rainfall amounts
- C to measure the speed of the wind
- D to measure the humidity level



3 What does a weather vane measure?

- A wind direction
- B temperature of wind
- C wind speed
- D wind chill



4 If you wanted to measure the amount of rain that falls in one week, you would use a(n) _____ to do so.

- A anemometer
- B wind vane
- C rain gauge



5



PREVIEW

Please [Sign In](#) or [Sign Up](#) to download the printable version of this worksheet

7

- A tornado
- B hurricane
- C tsunami
- D windstorm



- A never touches the ground
- B stays in the clouds
- C touches the ground
- D makes clouds



9 What is a drought?

- A a period of extremely cold weather
- B a long period of wet weather
- C a long period of dry weather
- D a long period of high humidity



10 A _____ is a large overflowing of water onto land that is normally dry.

- A waterfall
- B thunderstorm
- C flood
- D tornado





ANSWER KEY

A(n) _____ is used to **measure air pressure**.

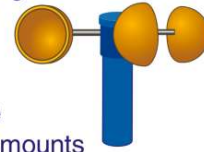
- A anemometer
- B wind vane
- C hygrometer
- D barometer



(d)

Why would a meteorologist use an **anemometer**?

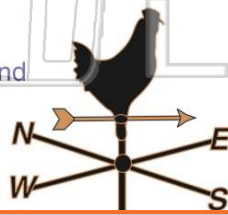
- A to measure the outside temperature
- B to measure rainfall amounts
- C to measure the speed of the wind
- D to measure the humidity level



(C)

What does a **weather vane** measure?

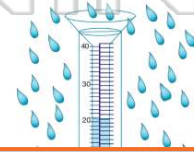
- A wind direction
- B temperature of wind
- C wind speed
- D wind chill



(a)

If you wanted to **measure the amount of rain that falls in one week**, you would use a(n) _____ to do so.

- A anemometer
- B wind vane
- C rain gauge
- D thermometer



(C)



PREVIEW

Please [Sign In](#) or [Sign Up](#) to download the printable version of this worksheet

- A tornado
- B hurricane
- C tsunami
- D windstorm



- A never touches the ground
- B stays in the clouds
- C touches the ground
- D makes clouds



What is a **drought**?

- A a period of extremely cold weather
- B a long period of wet weather
- C a long period of dry weather
- D a long period of high humidity



(C)

A _____ is a **large overflowing of water** onto land that is normally dry.

- A waterfall
- B thunderstorm
- C flood
- D tornado



(C)