



Name \_\_\_\_\_ Class \_\_\_\_\_ Date \_\_\_\_\_

1 Which of the following statements supports the fact that people use **oceans** as a **natural resource** for certain products?

**A** Many people drink eight glasses of water daily.

**B** Many people enjoy eating tuna fish.

**C** Many people eat chicken as a source of protein.

**D** Many people drink milk as a source of calcium.



2 **Atlantic, Pacific, Indian, Southern, and Arctic** are all names of \_\_\_\_\_.

**A** rivers

**B** lakes

**C** oceans

**D** bays



3 Which of the following occurs because of **ocean tides** and **currents**?

**A** Oceans are always above 30°C.

**B** Oceans are always moving.



4 Which statement is true of **ocean currents**?

**A** They cause tides to occur three times a day.

**B** They only move the top layer of ocean water.

**C** They move huge amounts of water long distances.



5

**PREVIEW**

Please [Sign In](#) or [Sign Up](#) to download the printable version of this worksheet

6

**B** water on Earth

**C** continents of Earth

**D** the Sun



**A** keeps the Moon in orbit around the Earth

**B** causes the stars to come out at night

**C** allows the weather to be warm on Earth

**D** causes Earth to be suitable for living



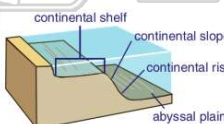
9 Imagine you just ran into the ocean and the water is up to your waist. On what **part of land** within the ocean are you standing upon?

**A** the continental slope

**B** the continental rise

**C** the continental shelf

**D** the abyssal plain



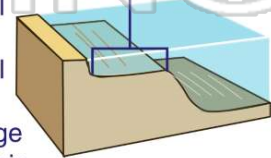
10 Which **area of the ocean** is marked with a **?** on the diagram below?

**A** the continental slope

**B** the continental shelf

**C** mid-ocean ridge

**D** the abyssal plain





## ANSWER KEY

Which of the following statements supports the fact that people use **oceans** as a **natural resource** for certain products?

- A Many people drink eight glasses of water daily.
- B Many people enjoy eating tuna fish.
- C Many people eat chicken as a source of protein.
- D Many people drink milk as a source of calcium.



(b)

**Atlantic, Pacific, Indian, Southern, and Arctic** are all names of \_\_\_\_\_.

- A rivers
- B lakes
- C oceans
- D bays



(c)

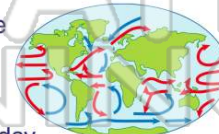
Which of the following occurs because of **ocean tides** and **currents**?



- A Oceans are always above 30°C.
- B Oceans are always moving.
- C Oceans are always below 10°C.
- D Oceans are always 1000m deep.

(b)

Which statement is true of **ocean currents**?



- A They cause tides to occur three times a day.
- B They only move the top layer of ocean water.
- C They move huge amounts of water long distances.
- D They cause a rise in the depth of the ocean.

(c)



## PREVIEW

Please [Sign In](#) or [Sign Up](#) to download the printable version of this worksheet

- C continents of Earth
- D the Sun



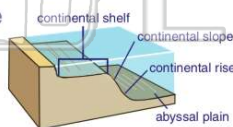
Moon

around the Earth

- B causes the stars to come out at night
- C allows the weather to be warm on Earth
- D causes Earth to be suitable for living

Imagine you just ran into the ocean and the water is up to your waist. On what **part of land** within the ocean are you standing upon?

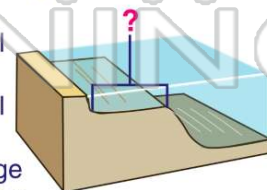
- A the continental slope
- B the continental rise
- C the continental shelf
- D the abyssal plain



(c)

Which **area of the ocean** is marked with a **?** on the diagram below?

- A the continental slope
- B the continental shelf
- C mid-ocean ridge
- D the abyssal plain



(b)