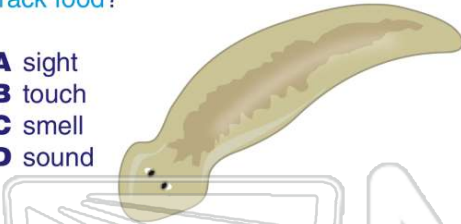




Name \_\_\_\_\_ Class \_\_\_\_\_ Date \_\_\_\_\_

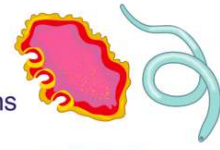
1 What **sense** do planarians use most to track food?

- A sight
- B touch
- C smell
- D sound



2 Which group of animals is thought to be the most **abundant** animals on earth?

- A humans
- B flatworms
- C segmented worms
- D roundworms



3 Which is the **most important substance** in a roundworm's environment?

- A water
- B food
- C nitrogen
- D carbon



4 Roundworms have a **digestive tract**.

- A no-way
- B one-way
- C two-way
- D three-way



## PREVIEW

Please [Sign In](#) or [Sign Up](#) to download the printable version of this worksheet

7

- A true
- B false

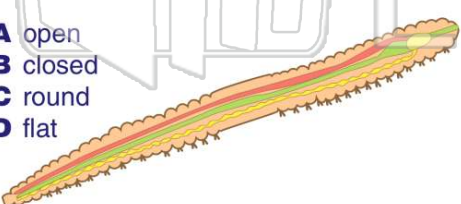


- A an anus
- C nerves
- D reproductive organs



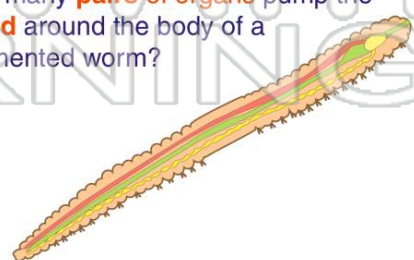
9 What type of **circulatory system** does a **segmented worm** have?

- A open
- B closed
- C round
- D flat



10 How many **pairs of organs** pump the **blood** around the body of a segmented worm?

- A 2
- B 3
- C 6
- D 8






## ANSWER KEY

What **sense** do planarians use most to track food?

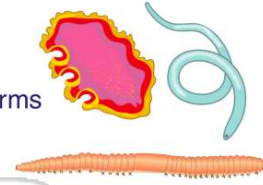
- A sight
- B touch
- C smell
- D sound



(C)

Which group of animals is thought to be the most **abundant** animals on earth?

- A humans
- B flatworms
- C segmented worms
- D roundworms



(D)

Which is the **most important substance** in a roundworm's environment?

- A water
- B food
- C nitrogen
- D carbon dioxide



(A)

Roundworms have a **digestive tract**.

- A no-way
- B one-way
- C two-way
- D three-way



(C)

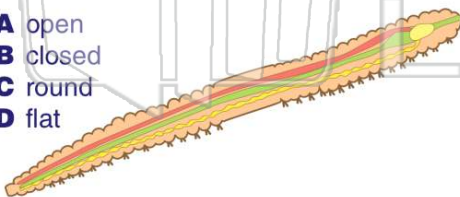


## PREVIEW

Please [Sign In](#) or [Sign Up](#) to download the printable version of this worksheet

What type of **circulatory system** does a **segmented worm** have?

- A open
- B closed
- C round
- D flat

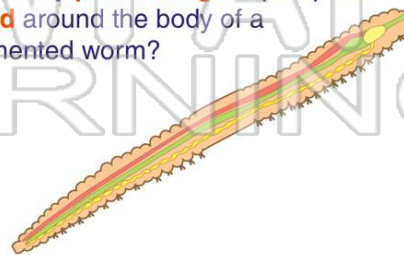


(B)

D reproductive organs

How many **pairs of organs** pump the **blood** around the body of a segmented worm?

- A 2
- B 3
- C 6
- D 8



(C)