



Name \_\_\_\_\_ Class \_\_\_\_\_ Date \_\_\_\_\_

1 The ability to produce energy from sunlight gives plants the name **producers**.

- A true
- B false



2 Which is an example of a **consumer**?

- A maple tree
- B ant
- C lettuce
- D grass



3 How is energy **transferred** from plants?

- A growing plants
- B fertilizing the plant's soil
- C breeding the plants
- D eating the plants



4 A **food web** is \_\_\_\_\_

- A the amount of time it takes to capture food
- B net like structure that traps food
- C made up of many different food chains in an ecosystem



5



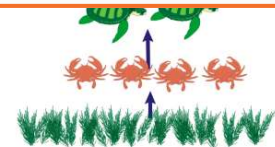
## PREVIEW

Please [Sign In](#) or [Sign Up](#) to download the printable version of this worksheet

- C reproducing
- D moving

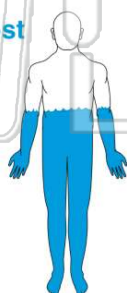


- A 90%
- B 50%
- C 10%
- D none



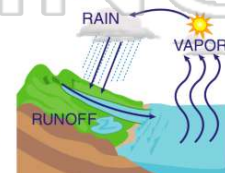
9 What **substance** is the **most abundant** in our bodies?

- A carbon dioxide
- B blood
- C water
- D oxygen



10 \_\_\_\_\_ is the process of water molecules in liquid form building up energy to **change to a gas state**.

- A Evaporation
- B Precipitation
- C Reduction
- D Condensation





## ANSWER KEY

The **ability to produce energy from sunlight** gives plants the name **producers**.

- A true
- B false



(a)

Which is an example of a **consumer**?

- A maple tree
- B ant
- C lettuce
- D grass



(b)

How is energy **transferred** from plants?

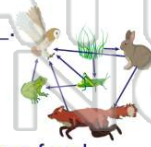
- A growing plants
- B fertilizing the plant's soil
- C breeding the plants
- D eating the plants



(d)

A **food web** is

- A the amount of time it takes to capture food
- B net like structure that traps food
- C made up of many different food chains in an ecosystem
- D a series (line) of organisms that eat



(c)



## PREVIEW

Please [Sign In](#) or [Sign Up](#) to download the printable version of this worksheet

What **substance** is the **most abundant** in our bodies?

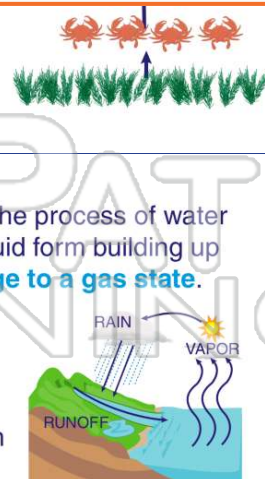
- A carbon dioxide
- B blood
- C water
- D oxygen



(c)

\_\_\_\_\_ is the process of water molecules in liquid form building up energy to **change to a gas state**.

- A Evaporation
- B Precipitation
- C Reduction
- D Condensation



(a)