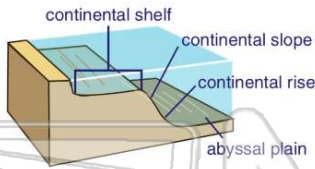




Name _____ Class _____ Date _____

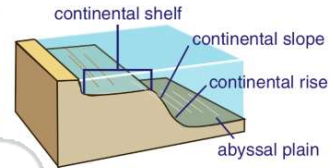
1 The region of the ocean floor that begins at the shoreline and **gradually deepens** toward the open ocean is called the _____.

- A continental shelf
- B continental slope
- C continental rise
- D abyssal plain



2 The **broad, flat, deepest** portion of the ocean is known as the _____.

- A continental shelf
- B continental slope
- C continental rise
- D abyssal plain



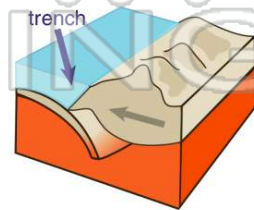
3 Down the **middle** of the Atlantic Ocean basin is a **mountain chain** formed by lava that pours out onto the ocean floor because of the separation of tectonic plates. **This underwater mountain chain is called the _____.**

- A abyssal plain
- B mid-ocean ridge



4 **Ocean trenches** form _____.

- A where tectonic plates pull apart from each other
- B in the middle of tectonic plates



5



PREVIEW

Please [Sign In](#) or [Sign Up](#) to download the printable version of this worksheet

7

- A nekton
- B plankton
- C benthos
- D dolphins



- B animallike, microscopic organisms
- C plantlike, macroscopic organisms
- D animallike, macroscopic organisms



9

The marine environment that refers to the **ocean floor** and all the marine organisms that live on it is sometimes referred to as the **bottom environment**. **The technical name for this environment is the _____.**

- A pelagic environment
- B phytoplankton zone
- C neritic zone
- D benthic environment



10

The marine environment that refers to the **entire** volume of **ocean water** in the world is referred to as the _____.

- A pelagic environment
- B intertidal zone
- C neritic zone
- D benthic environment

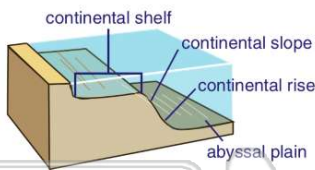




ANSWER KEY

The region of the ocean floor that begins at the shoreline and **gradually deepens** toward the open ocean is called the _____.

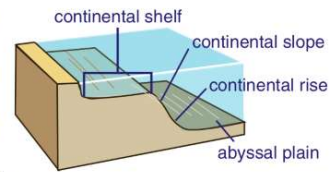
- A continental shelf
- B continental slope
- C continental rise
- D abyssal plain



(a)

The **broad, flat, deepest** portion of the ocean is known as the _____.

- A continental shelf
- B continental slope
- C continental rise
- D abyssal plain



(d)

Down the **middle** of the Atlantic Ocean basin is a **mountain chain** formed by lava that pours out onto the ocean floor because of the separation of tectonic plates. **This underwater mountain chain is called the _____.**

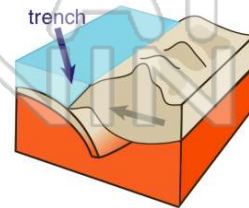
- A abyssal plain
- B mid-ocean ridge
- C continental rise
- D



(b)

Ocean trenches form _____.

- A where tectonic plates pull apart from each other
- B in the middle of tectonic plates
- C where an ocean plate is pushed under a continental plate



(c)



PREVIEW

Please [Sign In](#) or [Sign Up](#) to download the printable version of this worksheet

- B plankton
- C benthos
- D dolphins



- organisms
- C plantlike, macroscopic organisms
- D animallike, macroscopic organisms



The marine environment that refers to the **ocean floor** and all the marine organisms that live on it is sometimes referred to as the **bottom environment**. **The technical name for this environment is the _____.**

- A pelagic environment
- B phytoplankton zone
- C neritic zone
- D benthic environment



(d)

The marine environment that refers to the **entire** volume of **ocean water** in the world is referred to as the _____.

- A pelagic environment
- B intertidal zone
- C neritic zone
- D benthic environment



(a)