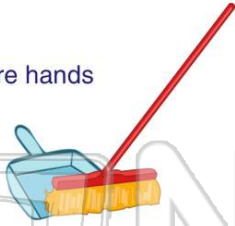




Name \_\_\_\_\_ Class \_\_\_\_\_ Date \_\_\_\_\_

1 When cleaning up a **broken glass beaker**, a student should \_\_\_\_\_.

- A ignore it
- B clean it up with bare hands
- C pick it up with protected hands
- D sweep the pieces into a corner



3 Which of the following words listed below is **energy**?

- A sunlight
- B water
- C candy
- D vitamins



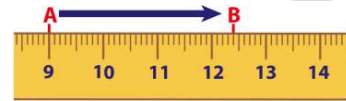
2 Using this data table, estimate the **height** of a plant if **320 grams** of fertilizer were used to grow it.

Height of Plant (centimeters)	10	15	20	25	30
Fertilizer (grams)	100	200	300	400	500

- A about 10 cm
- B about 14 cm
- C about 21 cm
- D about 27 cm

4 On the centimeter ruler below, what is the length to **point B** in **millimeters**?

- A 3 mm
- B 4 mm
- C 30 mm
- D 34 mm



## PREVIEW

Please [Sign In](#) or [Sign Up](#) to download the printable version of this worksheet

7  
A use dry hands  
B wear sneakers  
C clean the tabletop with water



- B harmless
- C poisonous
- D drinkable



9 Which of the following statements about a **scientific investigation** is true?

- A It is always a waste of time.
- B It sometimes proves a hypothesis.
- C It never proves anything.
- D It just makes the problem worse.

10 The **lab tool** shown in the picture below would be **used** to \_\_\_\_\_.

- A cut paper
- B hold a hot object
- C support a large beaker
- D clamp an object to the ring stand





## ANSWER KEY

When cleaning up a **broken glass beaker**, a student should \_\_\_\_\_.

- A ignore it
- B clean it up with bare hands
- C pick it up with protected hands
- D sweep the pieces into a corner



(C)

Using this data table, estimate the **height** of a plant if **320 grams** of fertilizer were used to grow it.

Height of Plant (centimeters)	10	15	20	25	30
Fertilizer (grams)	100	200	300	400	500

- A about 10 cm
- B about 14 cm
- C about 21 cm
- D about 27 cm

(C)

Which of the following words listed below is **energy**?

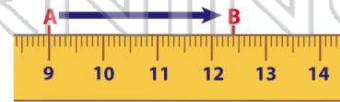
- A sunlight
- B water
- C candy
- D vitamins



(a)

On the centimeter ruler below, what is the length to **point B** in **millimeters**?

- A 3 mm
- B 4 mm
- C 30 mm
- D 34 mm



(d)



## PREVIEW

Please [Sign In](#) or [Sign Up](#) to download the printable version of this worksheet

D clean the tabletop with water



D drinkable



Which of the following statements about a **scientific investigation** is true?

- A It is always a waste of time.
- B It sometimes proves a hypothesis.
- C It never proves anything.
- D It just makes the problem worse.

(b)

The **lab tool** shown in the picture below would be **used** to \_\_\_\_\_.

- A cut paper
- B hold a hot object
- C support a large beaker
- D clamp an object to the ring stand

(b)

