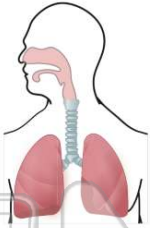


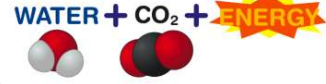


Name \_\_\_\_\_ Class \_\_\_\_\_ Date \_\_\_\_\_

- 1 What is the **function** of the **respiratory system**?
- A get carbon dioxide and get rid of oxygen
  - B get oxygen and get rid of carbon dioxide
  - C break down nutrients
  - D deliver nutrients to the cells of the body



- 2 Which is a **waste** created by **respiration**? **GLUCOSE + OXYGEN**
- ↓
- WATER + CO<sub>2</sub> + ENERGY**
- A oxygen
  - B energy
  - C nitrogen
  - D water



- 3 Which **body systems** are most important for **respiration**?
- A circulatory, digestive, and respiratory
  - B respiratory, excretory, and digestive
  - C digestive, immune, and muscle
  - D nervous, excretory, and immune

- 4 How much of the **atmosphere** is **oxygen**?
- A 78%
  - B 21%
  - C 9%
  - D 1%



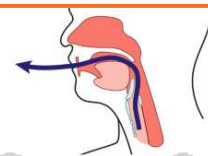
## PREVIEW

7 Please [Sign In](#) or [Sign Up](#) to download the printable version of this worksheet

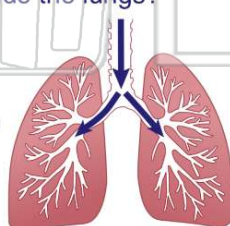
- that help it to stay open
- B shared by two body systems
  - C that connects the two lungs
  - D that produces the voice



- A burp
- B drool
- C cough
- D itch



- 9 Which item best **resembles** the **bronchi** that spread out inside the lungs?
- A a garden hose
  - B a carpet
  - C a blade of grass
  - D a tree



- 10 The \_\_\_\_\_ the **main structure** of the **respiratory system**.
- A bronchi are
  - B lungs are
  - C nose is
  - D pharynx is

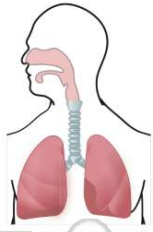




## ANSWER KEY

What is the **function** of the **respiratory system**?

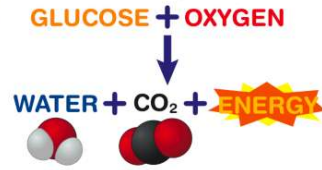
- A** get carbon dioxide and get rid of oxygen
- B** get oxygen and get rid of carbon dioxide
- C** break down nutrients
- D** deliver nutrients to the cells of the body



(b)

Which is a **waste** created by **respiration**?

- A** oxygen
- B** energy
- C** nitrogen
- D** water



(d)

Which **body systems** are most important for **respiration**?

- A** circulatory, digestive, and respiratory
- B** respiratory, excretory, and digestive
- C** digestive, immune, and muscle
- D** nervous, excretory, and immune

(a)

How much of the **atmosphere** is **oxygen**?

- A** 78%
- B** 21%
- C** 9%
- D** 1%



(b)



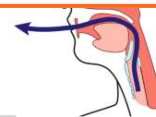
## PREVIEW

Please [Sign In](#) or [Sign Up](#) to download the printable version of this worksheet

- B** shared by two body systems
- C** that connects the two lungs
- D** that produces the voice

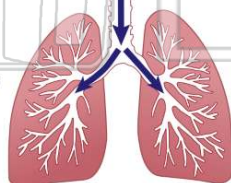


- A** burp
- B** drool
- C** cough
- D** itch



Which item best **resembles the bronchi** that spread out inside the lungs?

- A** a garden hose
- B** a carpet
- C** a blade of grass
- D** a tree



(d)

The \_\_\_\_\_ the **main structure** of the **respiratory system**.

- A** bronchi are
- B** lungs are
- C** nose is
- D** pharynx is



(b)