



Name _____ Class _____ Date _____

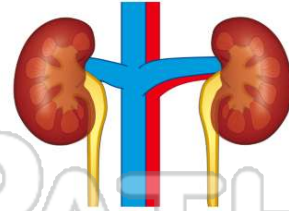
1 The breakdown of _____ produces **urea**.

- A carbohydrates
- B fiber
- C starch
- D proteins



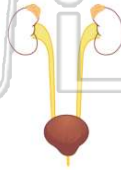
2 The **waste material** produced by the **kidneys** is called _____.

- A urea
- B urine
- C ureters
- D urethra



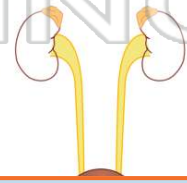
3 What is the **function** of the **urinary bladder**?

- A to store urine until it is eliminated
- B to eliminate waste from the body
- C to bring wastes from the kidneys to



4 **Urine** leaves the body through the _____.

- A urinary bladder
- B urea
- C urethra
- D anus



PREVIEW

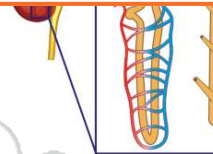
Please [Sign In](#) or [Sign Up](#) to download the printable version of this worksheet

7

- A water
- B blood cells
- C glucose
- D urea

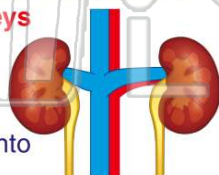


- A true
- B false



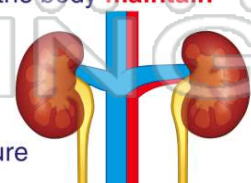
9 In addition to filtering out urea, another **function of the kidneys** is to _____.

- A produce proteins
- B convert the waste into usable materials
- C maintain water levels in the body
- D help to pump blood around the body



10 The **kidneys** help the body **maintain** _____.

- A homeostasis
- B nephronites
- C body temperature
- D insulin

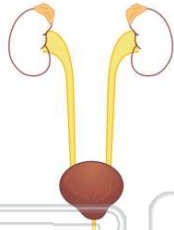




ANSWER KEY

The breakdown of _____ produces **urea**.

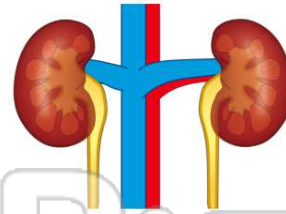
- A carbohydrates
- B fiber
- C starch
- D proteins



(d)

The **waste material** produced by the **kidneys** is called _____.

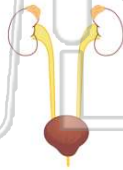
- A urea
- B urine
- C ureters
- D urethra



(b)

What is the **function** of the **urinary bladder**?

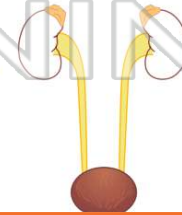
- A to store urine until it is eliminated
- B to eliminate waste from the body
- C to bring wastes from the kidneys to the ureters



(a)

Urine leaves the body through the _____.

- A urinary bladder
- B urea
- C urethra
- D anus



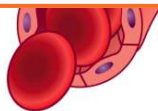
(c)



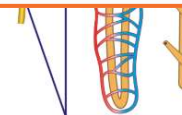
PREVIEW

Please [Sign In](#) or [Sign Up](#) to download the printable version of this worksheet

- B blood cells
- C glucose
- D urea

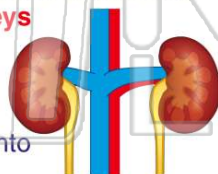


B raise



In addition to filtering out urea, another **function of the kidneys** is to _____.

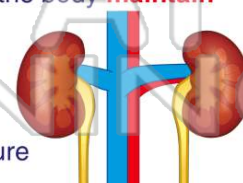
- A produce proteins
- B convert the waste into usable materials
- C maintain water levels in the body
- D help to pump blood around the body



(c)

The **kidneys** help the body **maintain** _____.

- A homeostasis
- B nephronites
- C body temperature
- D insulin



(a)