



Name _____ Class _____ Date _____

1 The **type of precipitation** that falls to earth's surface **depends** on _____.

A the type of cloud it comes from
B temperature
C air pressure
D wind speed



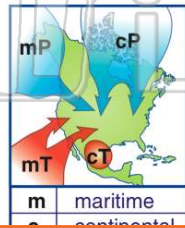
2 Changes in the weather of any region are the result of the interaction of **air masses**. An air mass is a large body of air with both **similar temperature** and **similar moisture** throughout the air body. **True or false?**

A true
B false



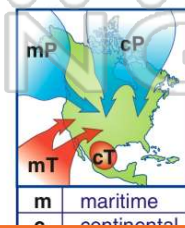
3 Which of the following air masses would be **warm** and **wet**?

A continental polar
B continental tropical
C maritime polar
D maritime tropical



4 The weather in **California** would be influenced most by which air mass?

A continental polar
B continental tropical
C maritime polar



PREVIEW

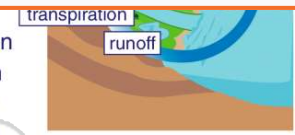
Please [Sign In](#) or [Sign Up](#) to download the printable version of this worksheet

7 _____ called _____.

A condensation
B transpiration
C evaporation
D precipitation

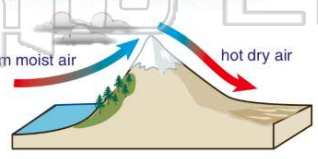


A condensation
B transpiration
C evaporation
D precipitation



9 As weather systems move from **west to east** toward a mountain system, they ascend. **As they ascend**, they release their water as rain or snow. **Describe the climate on the eastern side of the mountains.**

A very wet
B dry and arid
C windy
D tropical and humid



10 As warm, moist air rises to the west of a mountain range, significant rainfall causes green, well-watered land to develop, leaving the eastern side of the mountains dry and lightly-vegetated. **Geologists call this the _____.**

A rain shadow effect
B mountain top effect
C desert effect
D water cycle effect





ANSWER KEY

The **type of precipitation** that falls to earth's surface **depends** on _____.

- A** the type of cloud it comes from
- B** temperature
- C** air pressure
- D** wind speed



(b)

Changes in the weather of any region are the result of the interaction of **air masses**.

An air mass is a large body of air with both **similar temperature** and **similar moisture** throughout the air body.

True or false?

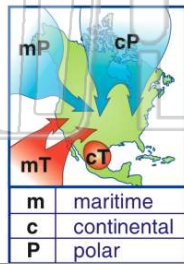
- A** true
- B** false



(a)

Which of the following air masses would be **warm** and **wet**?

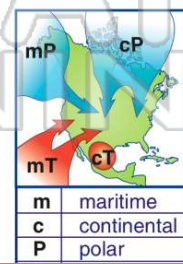
- A** continental polar
- B** continental tropical
- C** maritime polar
- D** maritime tropical



(d)

The weather in **California** would be influenced most by which air mass?

- A** continental polar
- B** continental tropical
- C** maritime polar
- D** maritime tropical



(d)



PREVIEW

Please [Sign In](#) or [Sign Up](#) to download the printable version of this worksheet

- A** condensation
- B** transpiration
- C** evaporation
- D** precipitation




- B** transpiration
- C** evaporation
- D** precipitation



As weather systems move from **west to east** toward a mountain system, they ascend. **As they ascend**, they release their water as rain or snow. Describe the climate on the **eastern side of the mountains**.

- A** very wet
- B** dry and arid
- C** windy
- D** tropical and humid



(b)

As warm, moist air rises to the west of a mountain range, significant rainfall causes green, well-watered land to develop, leaving the eastern side of the mountains dry and lightly-vegetated.

Geologists call this the _____.

- A** rain shadow effect
- B** mountain top effect
- C** desert effect
- D** water cycle effect



(a)