



Name \_\_\_\_\_ Class \_\_\_\_\_ Date \_\_\_\_\_


1 Another name for a **person who designs maps** is a \_\_\_\_\_.

- A teacher
- B geologist
- C cartographer
- D chef



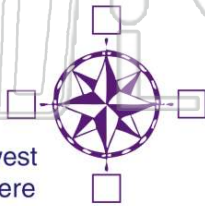
2 What is the name of this **map feature**?

- A latitude
- B compass rose
- C state
- D legend



3 What are the **four cardinal directions**?

- A north, south, east, west
- B north, west, there, here
- C near, far, close, in-between



4 Which of these is **not** a type of map?

- A road-map
- B cable TV map
- C weather map
- D political map



5



## PREVIEW

Please [Sign In](#) or [Sign Up](#) to download the printable version of this worksheet

7

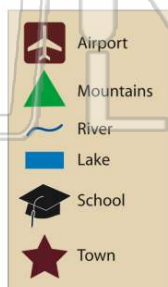
- A true
- B false



9

What **symbol** would show a **river**?


- A
- B
- C
- D



10

This is a \_\_\_\_\_.

- A longitude
- B scale
- C map
- D compass rose





## ANSWER KEY

Another name for a **person who designs maps** is a \_\_\_\_\_.


- A teacher
- B geologist
- C cartographer
- D chef



(C)

What is the name of this **map feature**?

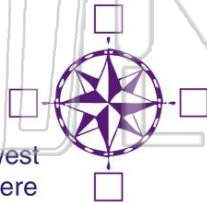
- A latitude
- B compass rose
- C state
- D legend



(d)

What are the **four cardinal directions**?

- A north, south, east, west
- B north, west, there, here
- C near, far, close, in-between
- D northwest, south, under, over



(a)

Which of these is **not** a type of map?

- A road map
- B cable TV map
- C weather map
- D political map



(b)



## PREVIEW

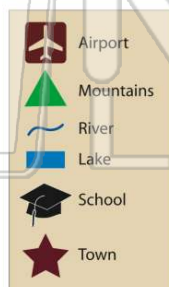
Please [Sign In](#) or [Sign Up](#) to download the printable version of this worksheet

- A true
- B false



What **symbol** would show a **river**?

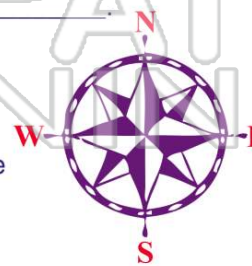
- A
- B
- C
- D



(b)

This is a \_\_\_\_\_

- A longitude
- B scale
- C map
- D compass rose



(d)