



Name _____ Class _____ Date _____

1 Some **maps** show different types of roads: highways, country roads, toll roads, or snowmobile trails.


- A true
- B false



3 **Scale: 1" = 10 miles**
If Newtown is **two inches** from Chesterville on the map, how many **miles** apart are the two towns?

- A 5 miles
- B 50 miles

2 This is a _____.



- A compass rose
- B scale
- C cardinal directions
- D legend

4 **Scale: 1 inch = 20 miles**
On the map, the airport is **one inch** away from the Flint's home. This means that the Flints live **25 miles** from the airport.



PREVIEW

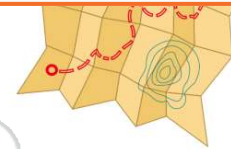
Please [Sign In](#) or [Sign Up](#) to download the printable version of this worksheet

7

- B country of Sweden
- C Earth
- D solar system



B false



9 If you saw **65° S 42° E**, to what does this refer?

- A latitude and longitude
- B secret code
- C scale of a map
- D compass rose coordinates

10 Why is it important to know how to use a map?

- A because maps tell time
- B because a map can help you find a new place
- C because maps tell synonyms
- D because a map will get you elected



ANSWER KEY

Some **maps** show different types of roads: highways, country roads, toll roads, or snowmobile trails.

- A true
- B false



(a)

This is a _____.



(b)

- A compass rose
- B scale
- C cardinal directions
- D legend

Scale: 1" = 10 miles

If Newtown is **two inches** from Chesterville on the map, how many **miles** apart are the two towns?

- A 5 miles
- B 50 miles
- C 20 miles

(c)

Scale: 1 inch = 20 miles

On the map, the airport is **one inch** away from the Flint's home. This means that the Flints live **25 miles** from the airport.

- A true
- B false



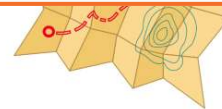
(b)



PREVIEW

Please [Sign In](#) or [Sign Up](#) to download the printable version of this worksheet

- C Earth
- D solar system



If you saw **65° S 42° E**, to what does this refer?

- A latitude and longitude
- B secret code
- C scale of a map
- D compass rose coordinates

(a)

Why is it important to know how to use a map?

- A because maps tell time
- B because a map can help you find a new place
- C because maps tell synonyms
- D because a map will get you elected

(b)