



Name _____ Class _____ Date _____

1 What is the capital of **Alabama**?

- A Dover
- B Boise
- C Montgomery
- D Montpelier



2 **Jefferson City** is the capital of _____.

- A Michigan
- B Kentucky
- C Delaware
- D Missouri



3 **Boise** is the capital of **Idaho**.

- A true
- B false



4 **All states** of the United States have a **capital city**.



5



PREVIEW

7 Please [Sign In](#) or [Sign Up](#) to download the printable version of this worksheet

- A true
- B false



- B false



9 What is the capital of **Maine**?

- A Annapolis
- B Augusta
- C Topeka
- D Jackson



10 **Honolulu** is the capital of a state that is in the eastern United States.

- A true
- B false





ANSWER KEY

What is the capital of **Alabama**?

- A Dover
- B Boise
- C Montgomery
- D Montpelier



(C)

Jefferson City is the capital of _____.

- A Michigan
- B Kentucky
- C Delaware
- D Missouri



(d)


Boise is the capital of **Idaho**.

- A true
- B false



(a)

All states of the United States have a **capital city**.



(a)




PREVIEW

Please [Sign In](#) or [Sign Up](#) to download the printable version of this worksheet

What is the capital of **Maine**?

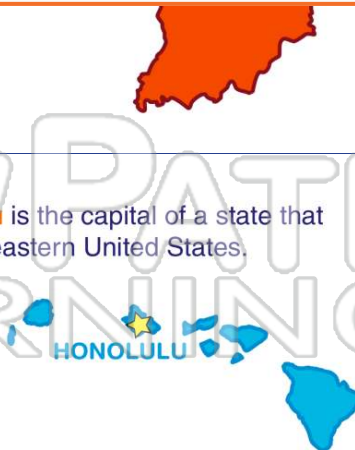
- A Annapolis
- B Augusta
- C Topeka
- D Jackson



(b)

Honolulu is the capital of a state that is in the eastern United States.

- A true
- B false



(b)