



Name _____ Class _____ Date _____

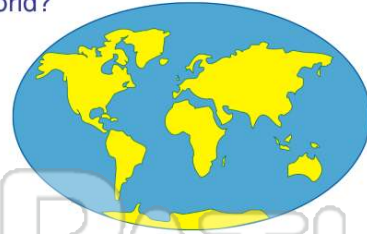
1 A major body of land is called a _____.

- A state
- B continent
- C mesa
- D plateau



2 How many **continents** are there in the world?

- A 5
- B 6
- C 7
- D 10



3 The **continents** are North America, South America, Asia, Europe, Australia, Antarctica, and _____.

- A North America
- B the United States
- C Canada
- D _____



4 Land surrounded on **three sides** by **water** is known as a _____.

- A mesa
- B peninsula
- C plateau
- D butte



5

A
t
o
a

A
E
C
D

A
A
E



PREVIEW

Please [Sign In](#) or [Sign Up](#) to download the printable version of this worksheet

7

- B source
- C delta
- D tributary



9 The **end** of a river is called the _____.

- A source
- B tributary
- C delta
- D mouth



10 A **fertile crescent of land** built up at the mouth of a river is called a _____.

- A butte
- B plateau
- C delta
- D suburb





ANSWER KEY

A major body of land is called a _____.

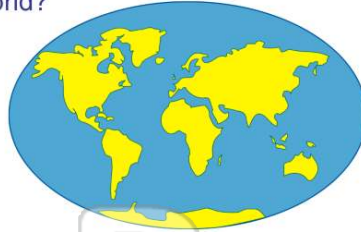
- A state
- B continent
- C mesa
- D plateau



(b)

How many **continents** are there in the world?

- A 5
- B 6
- C 7
- D 10



(c)

The **continents** are North America, South America, Asia, Europe, Australia, Antarctica, and _____.

- A North America
- B the United States
- C Canada
- D Africa



(d)

Land surrounded on **three sides** by **water** is known as a _____.

- A mesa
- B peninsula
- C plateau
- D butte



(b)




PREVIEW

Please [Sign In](#) or [Sign Up](#) to download the printable version of this worksheet

The **end** of a river is called the _____.

- A source
- B tributary
- C delta
- D mouth



(d)

D tributary



A fertile **rescnet of land** built up at the mouth of a river is called a _____.

- A butte
- B plateau
- C delta
- D suburb



(c)