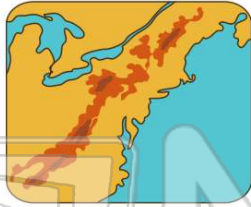




Name _____ Class _____ Date _____

1 The **type of map** that shows **geographic features** is a _____.

- A road map
- B political map
- C physical map
- D weather map



2 The **mountains** in the **northeast** part of New York State are the _____.

- A Adirondack Mountains
- B Andes Mountains
- C Rocky Mountains
- D Ural Mountains



3 The **mountains** in the **southeast** part of New York State are the _____.

- A Sierra Madre Mountains
- B Catskill Mountains
- C Green Mountains



4 A **Great Lake** on the **west** side of New York State is _____.

- A Lake Champlain
- B Lake Mead
- C Lake Lanier
- D Lake Erie



PREVIEW

Please [Sign In](#) or [Sign Up](#) to download the printable version of this worksheet

7

- A true
- B false

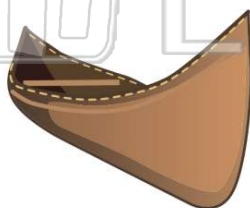


- B Seminole River
- C Mohawk River
- D Cherokee River



9 What **river** in New York State is named after an **explorer**?

- A Delaware River
- B Hudson River
- C East River
- D Mohawk River



10 The **river in western New York State** which forms **part of the border** between New York and Canada is the _____.

- A Niagara River
- B Mississippi River
- C Amazon River
- D Colorado River





ANSWER KEY

The **type of map** that shows **geographic features** is a _____.

- A road map
- B political map
- C physical map
- D weather map



(C)

The **mountains** in the **northeast** part of **New York State** are the _____.

- A Adirondack Mountains
- B Andes Mountains
- C Rocky Mountains
- D Ural Mountains



(a)

The **mountains** in the **southeast** part of **New York State** are the _____.

- A Sierra Madre Mountains
- B Catskill Mountains
- C Green Mountains
- D Blue Ridge Mountains



(b)

A **Great Lake** on the **west** side of **New York State** is _____.

- A Lake Champlain
- B Lake Mead
- C Lake Lanier
- D Lake Erie



(d)

C
P
A
B
C
D



PREVIEW

Please [Sign In](#) or [Sign Up](#) to download the printable version of this worksheet

B raise

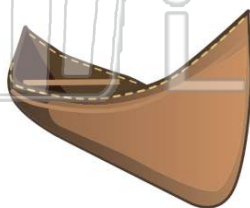


- C Mohawk River
- D Cherokee River



What **river** in **New York State** is named after an **explorer**?

- A Delaware River
- B Hudson River
- C East River
- D Mohawk River



(b)

The **river in western New York State** which forms **part of the border between New York and Canada** is the _____.

- A Niagara River
- B Mississippi River
- C Amazon River
- D Colorado River



(a)