



Name _____ Class _____ Date _____

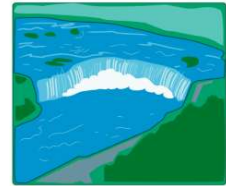
1 **Lake Ontario** is on the border of _____ and Canada.

- A Rhode Island
- B West Virginia
- C New York State
- D Kentucky



2 What river flows over **Niagara Falls**?

- A Mississippi River
- B Niagara River
- C Colorado River
- D Amazon River



3 **Long Island** is a large island east of New York City.

- A true
- B false



4 A **sound** is a body of water between an island and the mainland.

- A true
- B false



PREVIEW

7 Please [Sign In](#) or [Sign Up](#) to download the printable version of this worksheet



B false

- B Arctic Ocean
- C Atlantic Ocean
- D Pacific Ocean



9 The **surface** of the area that is now New York State was changed when **large masses of ice** called _____ retreated toward the north.

- A glaciers
- B snowballs
- C volcanoes
- D plates



10 The **highest point** in New York State is _____

- A Mt. Everest
- B Mt. Marcy
- C Mt. St. Helens
- D Pikes Peak





ANSWER KEY

Lake Ontario is on the border of _____ and Canada.


- A Rhode Island
- B West Virginia
- C New York State
- D Kentucky



(C)

What river flows over Niagara Falls?

- A Mississippi River
- B Niagara River
- C Colorado River
- D Amazon River



(b)

Long Island is a large island east of New York City.

- A true
- B false



(a)

A sound is a body of water between an island and the mainland.

- A true
- B false



(a)



PREVIEW

Please [Sign In](#) or [Sign Up](#) to download the printable version of this worksheet



- C Atlantic Ocean
- D Pacific Ocean



The surface of the area that is now New York State was changed when large masses of ice called _____ retreated toward the north.


- A glaciers
- B snowballs
- C volcanoes
- D plates



(a)

The highest point in New York State is _____.

- A Mt. Everest
- B Mt. Marcy
- C Mt. St. Helens
- D Pikes Peak



(b)