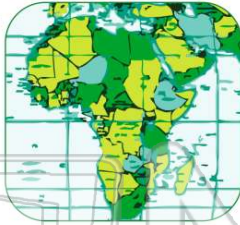




Name _____ Class _____ Date _____

1 The **type of map** that shows **countries, states, cities,** and the **borders** between them is a _____.

A physical map
B road map
C political map
D relief map



2 The name of **our state** is _____.

A Delaware
B New York State
C North Carolina
D Ohio



3 **New York State** is located in the **northeastern** part of the United States.

A true
B false



4 Which **country** shares a border with New York State?

A Mexico
B Peru
C Cuba
D Canada




5



PREVIEW

Please [Sign In](#) or [Sign Up](#) to download the printable version of this worksheet

B false



C Georgia
D California



9 The **capital** of **New York State** is _____.

A Washington, D.C.
B New York City
C Albany
D Rochester



10 The **city** of _____ is on **Lake Ontario**.

A New York
B Washington, D.C.
C Orlando
D Rochester

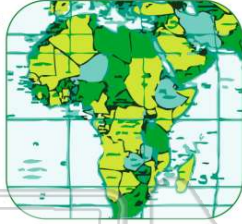




ANSWER KEY

The **type of map** that shows **countries, states, cities,** and the **borders** between them is a _____.

- A** physical map
- B** road map
- C** political map
- D** relief map



(c)

The name of **our state** is _____.

- A** Delaware
- B** New York State
- C** North Carolina
- D** Ohio



(b)

New York State is located in the **northeastern** part of the United States.

- A** true
- B** false



(a)

Which **country** shares a border with New York State?

- A** Mexico
- B** Peru
- C** Cuba
- D** Canada



(d)



PREVIEW

Please [Sign In](#) or [Sign Up](#) to download the printable version of this worksheet

The **capital** of **New York State** is _____.

- A** Washington, D.C.
- B** New York City
- C** Albany
- D** Rochester

(c)

The **city** of _____ is on **Lake Ontario**.

- A** New York
- B** Washington, D.C.
- C** Orlando
- D** Rochester

(d)

