



Name \_\_\_\_\_ Class \_\_\_\_\_ Date \_\_\_\_\_


1 The **state** of \_\_\_\_\_ is **east** of New York State.

- A Michigan
- B New Hampshire
- C Illinois
- D Texas




2 New York State and **Florida** share a border.

- A true
- B false



3 **Connecticut** is **east** of New York State.

- A true
- B false



4 What **city** is located on the **Hudson River**?

- A Niagara Falls
- B Syracuse
- C Albany
- D Rochester



5



## PREVIEW

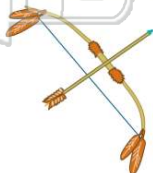
7 Please [Sign In](#) or [Sign Up](#) to download the printable version of this worksheet

- B New York City
- C Vermont
- D Texas



9 The **high-speed highway** that was built across **New York State** on the site of old Indian trails is the \_\_\_\_\_.

- A Expressway
- B Turnpike
- C Thruway
- D Freeway



10 What **waterway** that opened in 1825 **improved shipping** across New York State?

- A Erie Canal
- B Panama Canal
- C Shipping Canal
- D Suez Canal





## ANSWER KEY

The **state** of \_\_\_\_\_ is **east** of New York State.


- A Michigan
- B New Hampshire
- C Illinois
- D Texas



(b)

New York State and **Florida** share a border.

- A true
- B false



(b)

**Connecticut** is **east** of New York State.

- A true
- B false



(a)

What **city** is located on the **Hudson River**?

- A Niagara Falls
- B Syracuse
- C Albany
- D Rochester



(c)



## PREVIEW

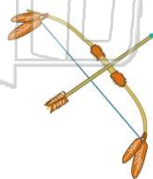
Please [Sign In](#) or [Sign Up](#) to download the printable version of this worksheet

- C Vermont
- D Texas



The **high-speed highway** that was built across **New York State** on the site of old Indian trails is the \_\_\_\_\_.

- A Expressway
- B Turnpike
- C Thruway
- D Freeway



(c)

What **waterway** that opened in 1825 **improved shipping** across New York State?

- A Erie Canal
- B Panama Canal
- C Shipping Canal
- D Suez Canal



(a)