



Name _____ Class _____ Date _____

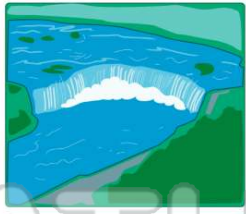
1 There are _____ seasons in the **Northeastern States**.

A one
B two
C three
D four




2 A famous waterfall in the **Northeastern Region** is _____.

A Niagara Falls
B Angel Falls
C Victoria Falls
D Southern Falls




3 A shellfish caught in traps in the waters off the coast of **Maine** is a _____.

A trout
B lobster
C salmon
D cod



4 **Lake Ontario** and **Lake Erie** are two of the _____.

A small bays
B Great Lakes
C large oceans
D famous rivers



5




PREVIEW


Please [Sign In](#) or [Sign Up](#) to download the printable version of this worksheet

7

A Newark
B New York
C Atlanta
D Houston




monument
B Fort Sumter
C the Liberty Bell
D the Lincoln Memorial



9 Raising crops and animals is also known as _____.

A hunting
B fishing
C gardening
D agriculture



10 **Chesapeake Bay** produces shellfish known as _____.

A crabs
B catfish
C perch
D halibut





ANSWER KEY

There are _____ seasons in the Northeastern States.

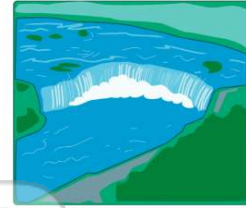
- A one
- B two
- C three
- D four



(d)

A famous waterfall in the Northeastern Region is _____.

- A Niagara Falls
- B Angel Falls
- C Victoria Falls
- D Southern Falls



(a)

A shellfish caught in traps in the waters off the coast of Maine is a _____.

- A trout
- B lobster
- C salmon
- D cod



(b)

Lake Ontario and Lake Erie are two of the _____.

- A small bays
- B Great Lakes
- C large oceans
- D famous rivers



(b)



PREVIEW

Please [Sign In](#) or [Sign Up](#) to download the printable version of this worksheet

D Houston



- C the Liberty Bell
- D the Lincoln Memorial



Raising crops and animals is also known as _____.


- A hunting
- B fishing
- C gardening
- D agriculture



(d)

Chesapeake Bay produces shellfish known as _____.

- A crabs
- B catfish
- C perch
- D halibut



(a)