



Name _____ Class _____ Date _____


1

New York State Government			
	Executive	Legislative	Judicial
Local	Mayor	City Council	13. _____
State	14. _____	Legislature	15. _____
National	16. _____	17. _____	Supreme Court

The answer to 15 is _____.

- A Judges
- B Governor
- C President
- D Congress

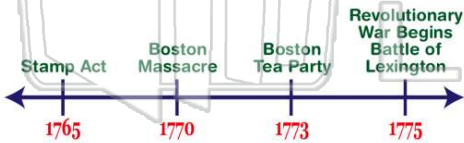
2



The Revolutionary War began in 1765.

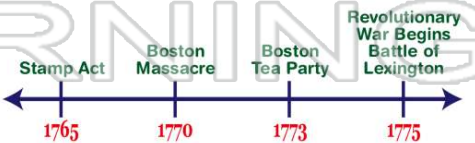
- A true
- B false

3



The Boston Massacre took place before the Revolutionary War began.

4



When did the Boston Tea Party take place?

5



PREVIEW

Please [Sign In](#) or [Sign Up](#) to download the printable version of this worksheet

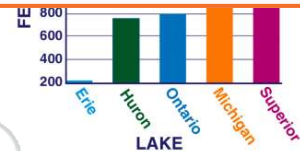
7

stands for a city?
 ☆ State Capital - Albany
 ● City

- A mountain peaks
- B star in a circle
- C star
- D circle

Ontario.

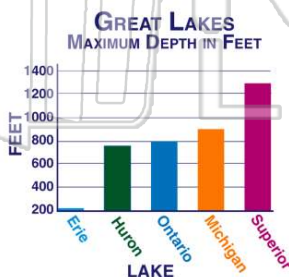
- A true
- B false



9

The shallowest lake on the graph is Lake Erie.

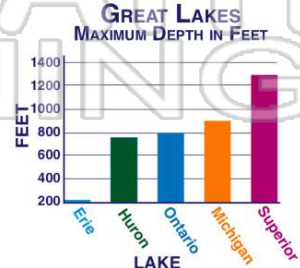
- A true
- B false



10

According to the graph, there are five Great Lakes.

- A true
- B false



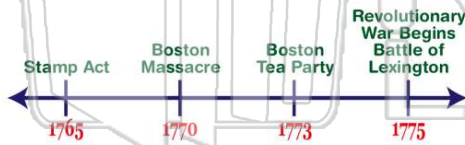


ANSWER KEY


New York State Government 			
	Executive	Legislative	Judicial
Local	Mayor	City Council	13. _____
State	14. _____	Legislature	15. _____
National	16. _____	17. _____	Supreme Court

The answer to 15 is _____.

- A Judges
- B Governor
- C President
- D Congress

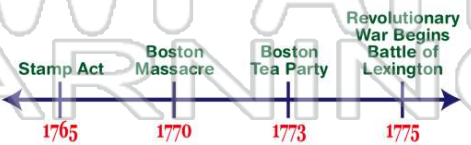


The **Boston Massacre** took place before the Revolutionary War began.



The Revolutionary War began in 1765.

- A true
- B false



When did the **Boston Tea Party** take place?

- A 1765
- C 1773



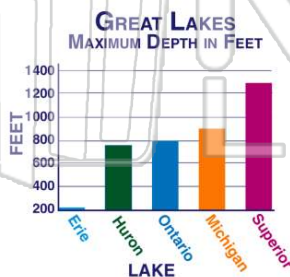
PREVIEW

Please [Sign In](#) or [Sign Up](#) to download the printable version of this worksheet

- A mountain peaks
- B star in a circle
- C star
- D circle

The **shallowest** lake on the graph is **Lake Erie**.

- A true
- B false



- A true
- B false



According to the graph, there are **five** Great Lakes.

- A true
- B false

