



Name _____ Class _____ Date _____

1 A **chain of islands** is referred to as _____.

- A a reef
- B an archipelago
- C a strait
- D an atoll




3 _____ is the standard used to determine land **elevation** and **sea depths**.

- A Global warming
- B Tide depth
- C Ocean current



2 A deep valley characterized by a body of water running through it is called a **canyon**.

- A true
- B false



4 **Shallow** bodies of water separated from the sea by sandbars or reefs are called _____.

- A deltas
- B basins
- C lagoons



PREVIEW

Please [Sign In](#) or [Sign Up](#) to download the printable version of this worksheet

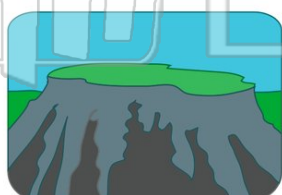
7 _____ seasonal changes
B the state of the atmosphere
C the presence of severe storms
D the temperature at a specific time



- B reef
- C plain
- D desert

9 What **elevated** landform is named so because it resembles a table top?

- A atoll
- B fjord
- C mesa
- D topography



10 In which area is a **reef** usually located?

- A next to an island chain
- B at or beneath sea level
- C at the base of a mountain
- D at the foundation of a city



ANSWER KEY

A **chain of islands** is referred to as _____.


- A a reef
- B an archipelago
- C a strait
- D an atoll



(b)

A deep valley characterized by a body of water running through it is called a **canyon**.

- A true
- B false



(a)

_____ is the standard used to determine land **elevation** and **sea depths**.

- A Global warming
- B Tide depth
- C Ocean current
- D Sea level



(d)

Shallow bodies of water separated from the sea by sandbars or reefs are called _____.

- A deltas
- B basins
- C lagoons
- D plateaus

(c)



PREVIEW

Please [Sign In](#) or [Sign Up](#) to download the printable version of this worksheet

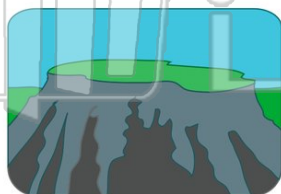
- B the state of the atmosphere
- C the presence of severe storms
- D the temperature at a specific time



- C plain
- D desert

What **elevated** landform is named so because it resembles a table top?

- A atoll
- B fjord
- C mesa
- D topography



(c)

In which area is a **reef** usually located?

- A next to an island chain
- B at or beneath sea level
- C at the base of a mountain
- D at the foundation of a city

(b)