




The New Government in Operation


Name _____ Class _____ Date _____

1 What was the name of the **1795 treaty** that established **peace** between the **United States and Spain**?




A the Godoy Treaty
B the Pinckney Treaty
C the Spanish-American Act
D the Peace Treaty of 1795

2 The **Louisiana Purchase** was territory **purchased** by the United States **from whom**?




A Great Britain
B France
C Spain
D Mexico

3 How much did the **United States pay** for the land included in the **Louisiana Purchase**?



A \$1 million
B \$10 million
C \$15 million
D \$20 million

4 Approximately how many **total acres** was the territory in the **Louisiana Purchase**?



A 345 million
B 190 million
C 10 million
D 50 million

5



PREVIEW

Please [Sign In](#) or [Sign Up](#) to download the printable version of this worksheet

7

A Squanto
B Sacagawea
C Sequoyah
D Geronimo




A true
B false



9 Which group of people was **opposed** to the **War of 1812**?

A the Navy
B Canadians
C Southern colonies
D New Englanders

10 The **War of 1812** was **fought between** the United States and _____.



A Great Britain
B Spain
C France
D Mexico



ANSWER KEY

What was the name of the **1795 treaty** that established **peace** between the **United States and Spain**?



- A the Godoy Treaty
- B the Pinckney Treaty
- C the Spanish-American Act
- D the Peace Treaty of 1795

(b)

The **Louisiana Purchase** was territory **purchased** by the United States **from whom**?



- A Great Britain
- B France
- C Spain
- D Mexico

(b)

How much did the **United States pay** for the land included in the **Louisiana Purchase**?



- A \$1 million
- B \$10 million
- C \$15 million
- D \$50 million

(c)

Approximately how many **total acres** was the territory in the **Louisiana Purchase**?



- A 345 million
- B 190 million
- C 10 million
- D 530 million


(d)



PREVIEW

Please [Sign In](#) or [Sign Up](#) to download the printable version of this worksheet

- A Squanto
- B Sacagawea
- C Sequoyah
- D Geronimo



B false



Which group of people was **opposed** to the **War of 1812**?

- A the Navy
- B Canadians
- C Southern colonies
- D New Englanders

(d)

The **War of 1812** was **fought between** the United States and _____.

- A Great Britain
- B Spain
- C France
- D Mexico



(a)