




Name _____ Class _____ Date _____

1 The **Quebec Act** of 1774 was an act of _____ which set **procedures of governance** in the Province of Quebec.

- A the United States of America
- B the Parliament of Great Britain
- C the Canadian government
- D the people



2 In what **year** was the **Quebec Act** passed?

- A 1767
- B 1738
- C 1774
- D 1758




NEW PATH LEARNING

3 What year did the **British** take over **Quebec City**?




4 What was the name of the **armed uprisings** in Canada in 1837 and 1838?



5
PREVIEW
Please [Sign In](#) or [Sign Up](#) to download the printable version of this worksheet

7
A Saskatchewan
B Nova Scotia
C Prince Edward Island
D Yukon



the Confederation?

- A New Brunswick
- B Manitoba
- C Prince Edward Island
- D Newfoundland

9 When was the **Canadian flag** that bears a maple leaf first inaugurated?

- A 1738
- B 1965
- C 1817
- D 1606



10 On which **degree of latitude** does the **border** between Canada and the United States fall?

- A 49° N
- B 59° N
- C 17° N
- D 12° N



NEW PATH LEARNING



Name _____ Class _____ Date _____

1 The **Quebec Act** of 1774 was an act of _____ which set **procedures of governance** in the Province of Quebec.

- A the United States of America
- B the Parliament of Great Britain
- C the Canadian government
- D the people



2 In what **year** was the **Quebec Act** passed?

- A 1767
- B 1738
- C 1774
- D 1758



3 What year did the **British** take over **Quebec City**?



4 What was the name of the **armed uprisings** in Canada in 1837 and 1838?




5

PREVIEW

Please [Sign In](#) or [Sign Up](#) to download the printable version of this worksheet

7

- A Saskatchewan
- B Nova Scotia
- C Prince Edward Island
- D Yukon



the **Confederation**?

- A New Brunswick
- B Manitoba
- C Prince Edward Island
- D Newfoundland

9 When was the **Canadian flag** that bears a maple leaf first inaugurated?

- A 1738
- B 1965
- C 1817
- D 1606



10 On which **degree of latitude** does the **border** between Canada and the United States fall?

- A 49° N
- B 59° N
- C 17° N
- D 12° N

