




Name _____ Class _____ Date _____

1 The **Phoenicians** were known as the most prominent **navigators** and _____ of their time.

A traders
B farmers
C pyramid builders
D clay workers



2 On which **sea** did the **Phoenicians** settle?

A Red Sea
B Mediterranean Sea
C Atlantic Sea
D Black Sea



3 Phoenicians excelled at **maritime trading**, which was their main industry.

True or false?

A true
B false



4 Where was **Phoenicia** located?

A Sub-Saharan Africa
B China
C Canaan
D Rome



5

PREVIEW

Please [Sign In](#) or [Sign Up](#) to download the printable version of this worksheet

7

B religious tribes
C islands
D farming communities


B it had thousands of characters to demonstrate different ideas
C it was the first used to communicate
D it was the first to use symbols for individual sounds

9 Phoenicians practiced **pantheism**, which is interpreted as which of the following?

A "God is Here"
B "God is Everything"
C "God is One"
D "God is Obsolete"

10 Approximately how long was Tyre able to **fight off the Macedonian forces** in the 4th century B.C.?

A 13 years
B 2 days
C 7 months
D 1 hour






ANSWER KEY

The **Phoenicians** were known as the most prominent **navigators** and _____ of their time.

- A** traders
- B** farmers
- C** pyramid builders
- D** clay workers



(a)

On which **sea** did the **Phoenicians** settle?

- A** Red Sea
- B** Mediterranean Sea
- C** Atlantic Sea
- D** Black Sea



(b)

Phoenicians excelled at **maritime trading**, which was their main industry.

True or false?

- A** true
- B** false



(a)

Where was **Phoenicia** located?

- A** Sub-Saharan Africa
- B** China
- C** Canaan
- D** Rome



(c)



PREVIEW

Please [Sign In](#) or [Sign Up](#) to download the printable version of this worksheet

D faming communities

- C** it was the first used to communicate
- D** it was the first to use symbols for individual sounds

Phoenicians practiced **pantheism**, which is interpreted as which of the following?

- A** "God is Here"
- B** "God is Everything"
- C** "God is One"
- D** "God is Obsolete"

(b)

Approximately how long was Tyre able to **fight off the Macedonian forces** in the 4th century B.C.?

- A** 13 years
- B** 2 days
- C** 7 months
- D** 1 hour



(c)