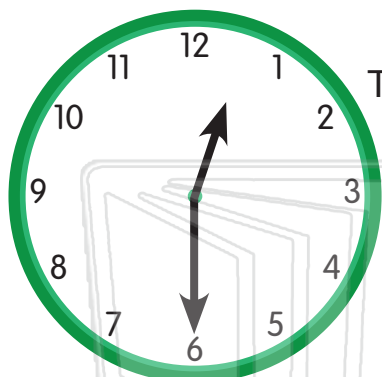




Name _____ Class _____ Date _____

Write the time shown. Then write the new time. Draw the new time on the clock.



Time shown: _____

► 30 minutes later ►

New time: _____



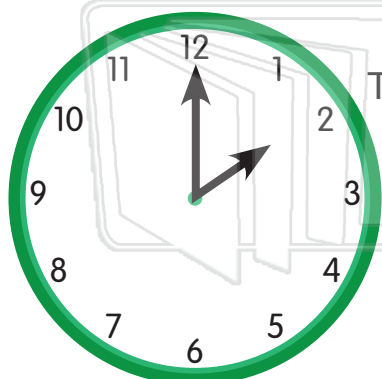
Time shown: _____



PREVIEW

Please [Sign In](#) or [Sign Up](#) to download the printable version of this worksheet


New time: _____



Time shown: _____

► 30 minutes earlier ►

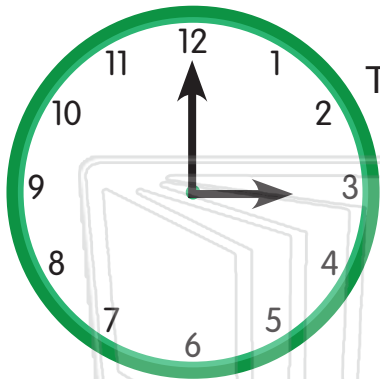
New time: _____





Name _____ Class _____ Date _____


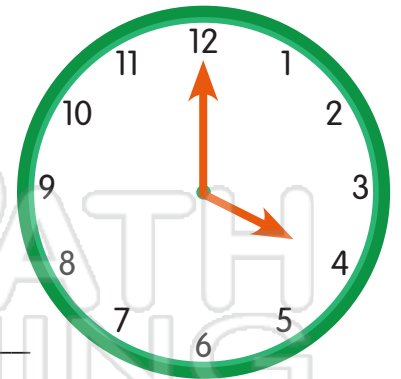
Write the time shown. Then write the new time. Draw the new time on the clock.



Time shown: 3:00

► 60 minutes later ►

New time: 4:00



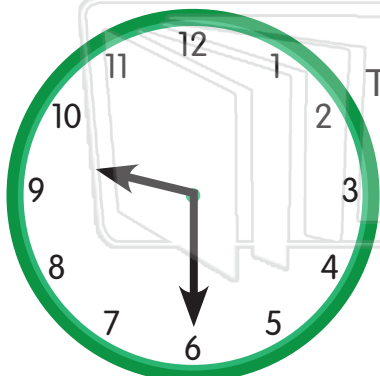
Time shown: 5:00



PREVIEW

Please [Sign In](#) or [Sign Up](#) to download the printable version of this worksheet

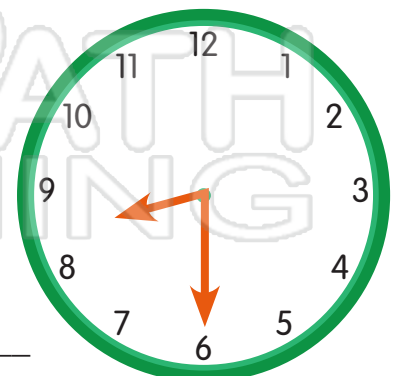
New time: _____



Time shown: 9:30

► 60 minutes earlier ►

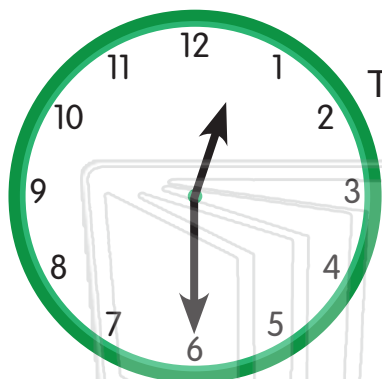
New time: 8:30





Name _____ Class _____ Date _____


Write the time shown. Then write the new time. Draw the new time on the clock.



Time shown: 12:30

▶ 30 minutes later ▶

New time: 1:00



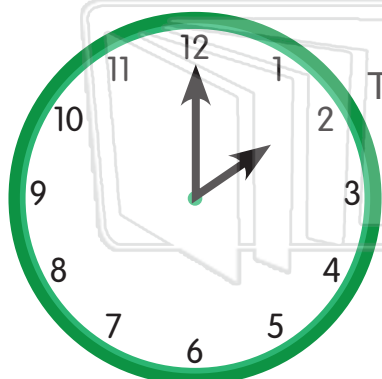
Time shown: 5:00



PREVIEW

Please [Sign In](#) or [Sign Up](#) to download the printable version of this worksheet

New time: _____



Time shown: 2:00

▶ 30 minutes earlier ▶

New time: 1:30

