




Name \_\_\_\_\_ Class \_\_\_\_\_ Date \_\_\_\_\_



This clock says 2:30 or half past 2.

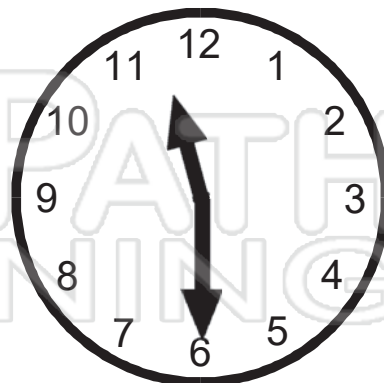
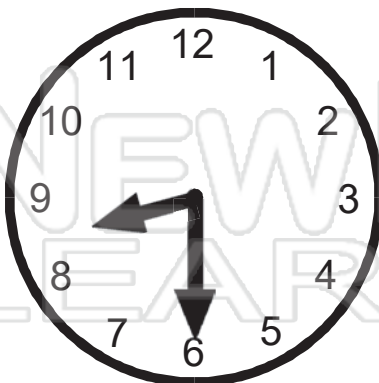
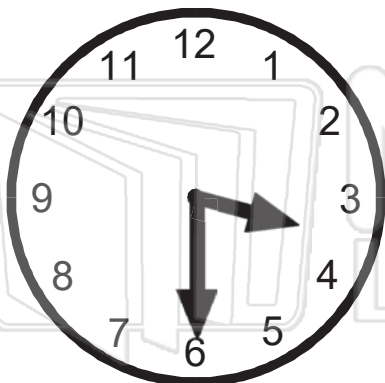
The long hand always points to the 6 for the half hour. The short hand will be half way between the hour just gone and the next hour. In this example the shorter hand is half way between the 2 and the 3.

● **What times are these clocks showing?**



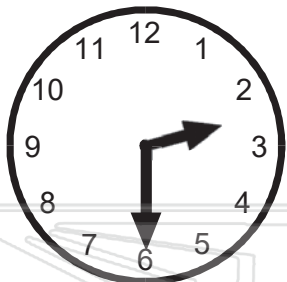
## PREVIEW

Please [Sign In](#) or [Sign Up](#) to download the printable version of this worksheet



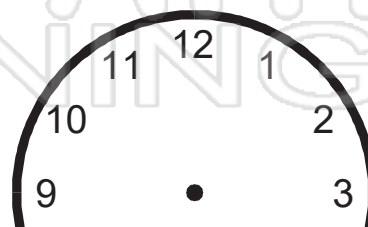
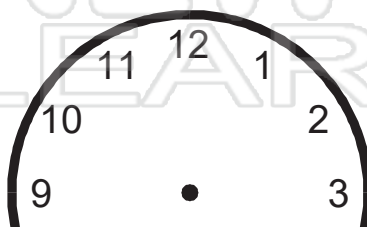
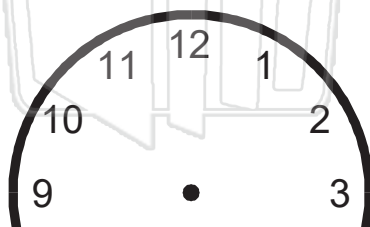


Name \_\_\_\_\_ Class \_\_\_\_\_ Date \_\_\_\_\_



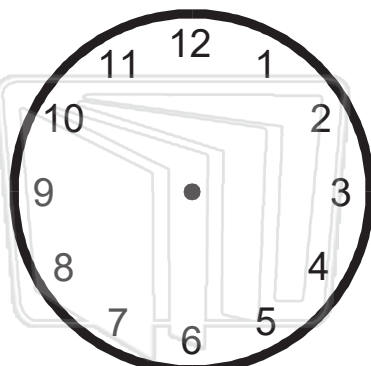
If you wanted to show half past 2 on this clock face, you would place the hands as shown.

● Show these times on the clock faces.



## PREVIEW

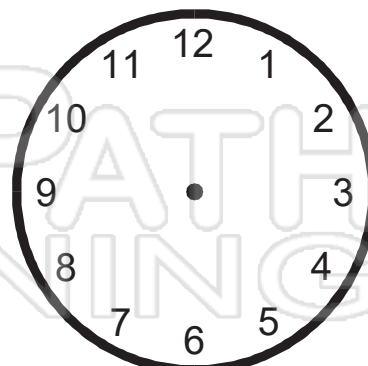
Please [Sign In](#) or [Sign Up](#) to download the printable version of this worksheet



▶ half past 6  
6:30




▶ half past 12  
12:30



▶ half past 8  
8:30



Name \_\_\_\_\_ Class \_\_\_\_\_ Date \_\_\_\_\_



This clock says 2:30 or half past 2.

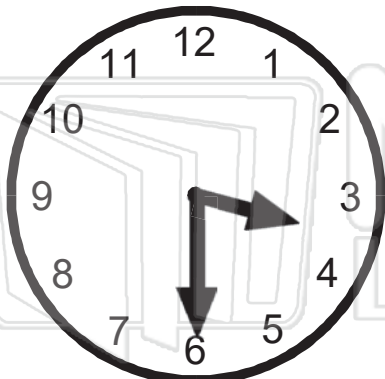
The long hand always points to the 6 for the half hour. The short hand will be half way between the hour just gone and the next hour. In this example the shorter hand is half way between the 2 and the 3.

● **What times are these clocks showing?**

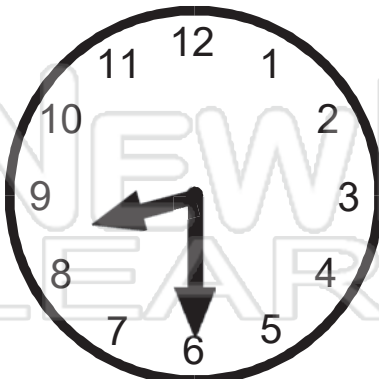


## PREVIEW

Please [Sign In](#) or [Sign Up](#) to download the printable version of this worksheet



▶ **3:30**



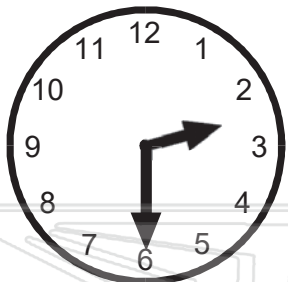
▶ **8:30**



▶ **11:30**



Name \_\_\_\_\_ Class \_\_\_\_\_ Date \_\_\_\_\_



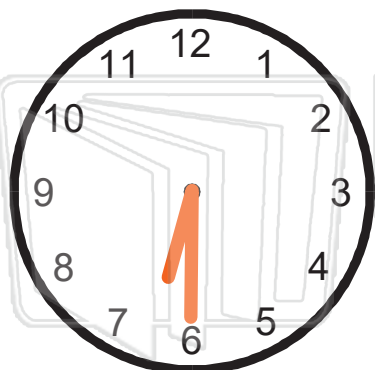
If you wanted to show half past 2 on this clock face, you would place the hands as shown.

● Show these times on the clock faces.



## PREVIEW

Please [Sign In](#) or [Sign Up](#) to download the printable version of this worksheet



▶ half past 6  
6:30



▶ half past 12  
12:30



▶ half past 8  
8:30