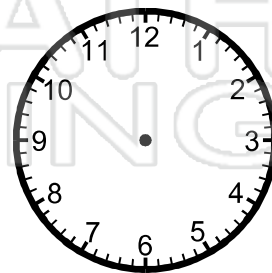
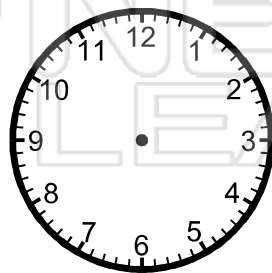
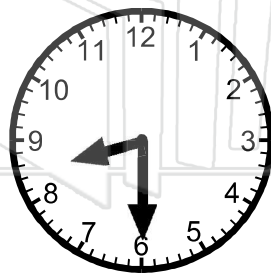





Name _____ Class _____ Date _____

● Change the times by an hour or half hour.

Write the new times.


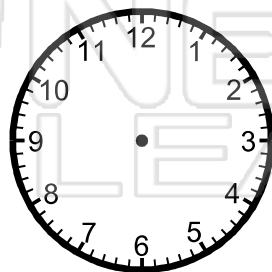
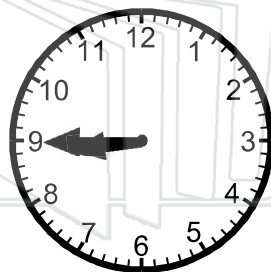


PREVIEW

Please [Sign In](#) or [Sign Up](#) to download the printable version of this worksheet

$\frac{1}{2}$ hour earlier ▶ _____

$\frac{1}{2}$ hour later ▶ _____



1 hour earlier ▶ _____

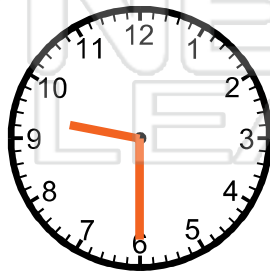


$\frac{1}{2}$ hour later ▶ _____



Name _____ Class _____ Date _____

● Change the times by an hour or half hour.

Write the new times.



PREVIEW

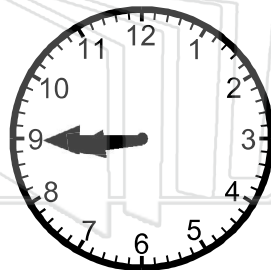
Please [Sign In](#) or [Sign Up](#) to download the printable version of this worksheet

$\frac{1}{2}$ hour earlier ▶

4:00

$\frac{1}{2}$ hour later ▶

12:50



1 hour earlier ▶

7:45

$\frac{1}{2}$ hour later ▶

1:20