

What are Shapes?

- Shapes are everywhere. They are at school, at home, inside, and outside.
- A shape is the form something takes.
- Some shapes can stack.
- One shape can roll.
- For shapes with sides and corners, the number of sides is equal to the number of corners.

How to figure out shapes:

- A **square** is a shape with four equal sides and four corners. A square can stack.



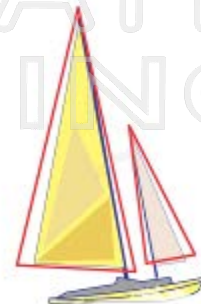
• A square is a shape with four equal sides and four corners. A square can stack.

re two


PREVIEW

Please [Sign In](#) or [Sign Up](#) to download the printable version of this worksheet

A **triangle** is a shape with three sides and three corners. A triangle cannot stack.



- A **diamond** has four sides. It is a square turned up on a corner.



A **circle** does not have any sides. It is round. A circle can roll.



Try This
• N



PREVIEW

Please [Sign In](#) or [Sign Up](#) to download the printable version of this worksheet



triangle



rectangle



circle



diamond

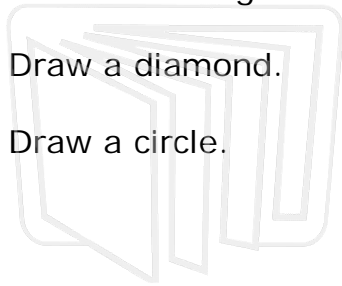
- Draw the following shapes.

Draw a square. _____

Draw a rectangle. _____

Draw a diamond. _____

Draw a circle. _____



PREVIEW

Please [Sign In](#) or [Sign Up](#) to download the printable version of this worksheet

