

BAR, CIRCLE, AND LINE GRAPHS

What Are Bar, Circle, and Line Graphs?

Bar Graphs are used to compare data. A bar graph is used to show relationships between groups.

Circle Graphs are also known as Pie graphs or charts. They consist of a circle divided into parts. The different parts show different amounts, sizes, or numbers of various data. The data is usually in percentages and plotted proportionally within a circle, meaning each portion of the circle will add up to 100% when added together.

Line G

How t

Use the
compa



PREVIEW

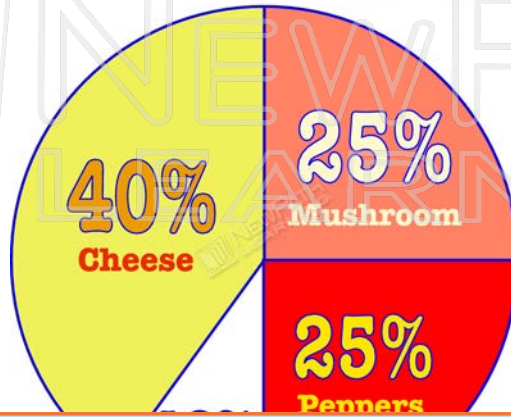
Please [Sign In](#) or [Sign Up](#) to download the printable version of this worksheet



There were 75 votes in all for mascots.

Use the percentages on a **Circle Graph** to determine the data being shown.

Favorite Pizza Toppings



40% of

Use the
represent



PREVIEW

Please [Sign In](#) or [Sign Up](#) to download the printable version of this worksheet



Three months have the same temperature of 40°.

Try This!

Bar Graph



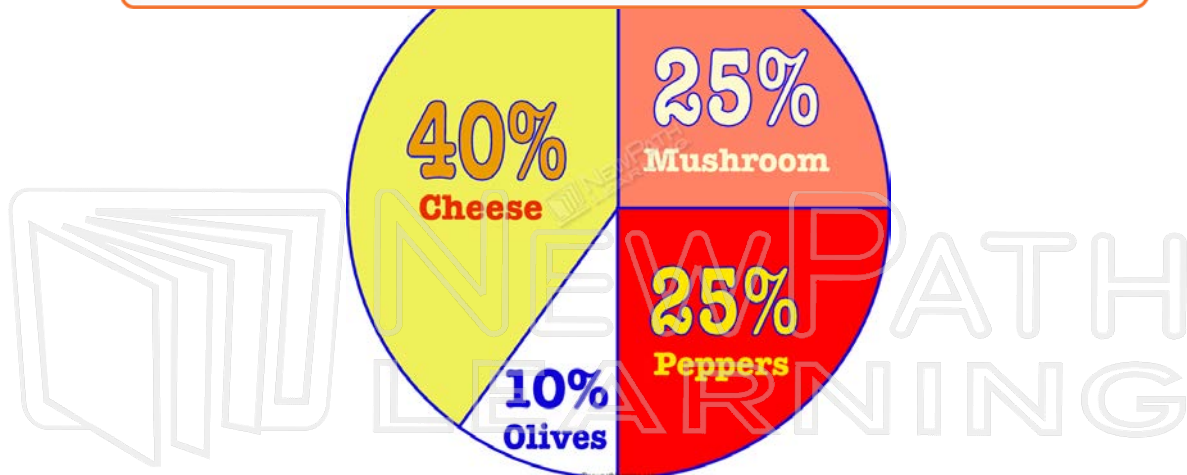
What

Circle



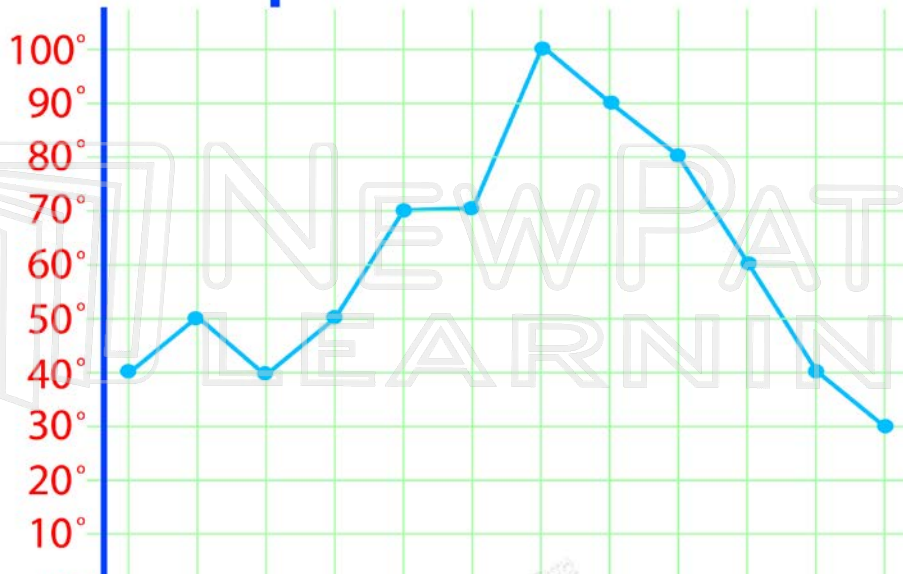
PREVIEW

Please [Sign In](#) or [Sign Up](#) to download the printable version of this worksheet



What percent of people like olives best? _____

Temperatures for 1 Year



Line G

What is



PREVIEW

Please [Sign In](#) or [Sign Up](#) to download the printable version of this worksheet

