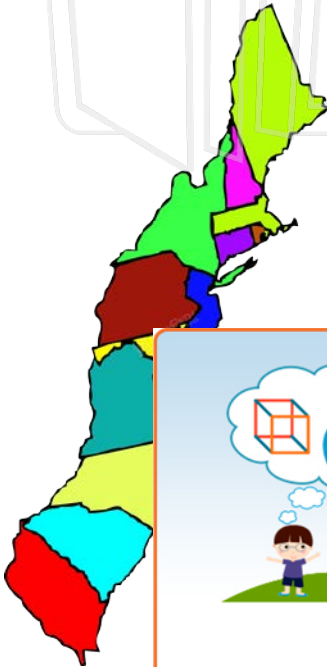


NEW ENGLAND, MIDDLE, AND SOUTHERN COLONIES

Where were the Thirteen Colonies located?

The Thirteen American colonies belonging to Great Britain were located along the eastern coast of what is now the United States of America. The colonies were divided into three groups, based on their locations and their economies.



PREVIEW

Please [Sign In](#) or [Sign Up](#) to download the printable version of this worksheet

The New

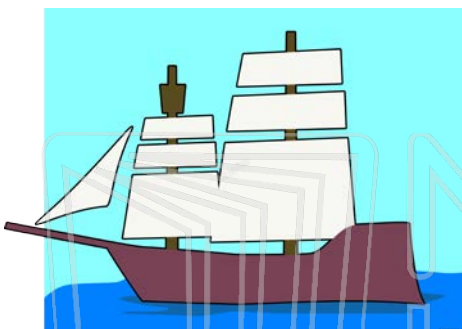
Location

Colonies

Land: ro

Economy: based on fishing, trading, and shipbuilding

Island



Major Port: Boston

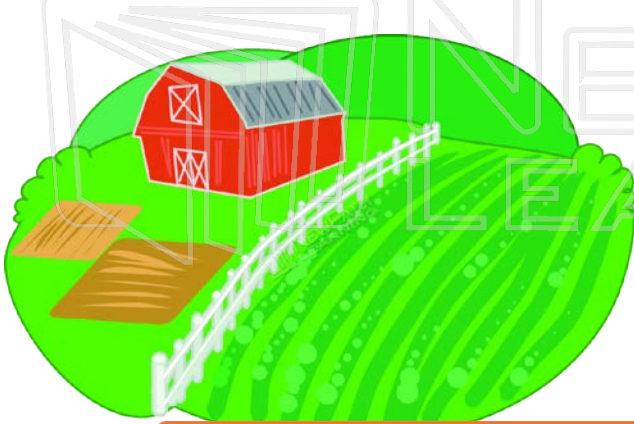
Other Important Information: Towns were built around a central area called the common.

The Middle Colonies

Location: between the New England Colonies and the Southern Colonies

Colonies: Pennsylvania, New Jersey, Delaware, and New York

Land: Soil was better than the soil in the New England Colonies, so some people lived and worked on farms.



Economy:
Major Products:
Other Industries:
 leather goods

The Southern Colonies
Location:
Colonies:
Land: fertile
Economy:
Major Products:
Other Industries:



PREVIEW

Please [Sign In](#) or [Sign Up](#) to download the printable version of this worksheet

known as plantations. On plantations, crops like rice, indigo, and tobacco were grown. Because of the sizes of their plantations, many Southerners relied on slave labor to farm their land. Slaves were people who were captured in Africa and forced to work for free.



A row of colorful educational icons including a cube, microscope, protractor, globe, atom, pie chart, bar graph, and math symbols, with a group of diverse children standing below them.

PREVIEW

Please [Sign In](#) or [Sign Up](#) to download the printable version of this worksheet

