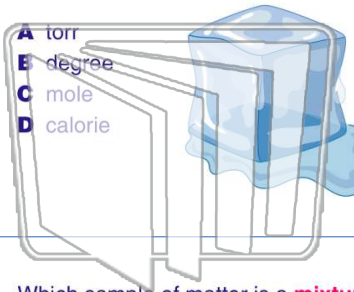




Name _____ Class _____ Date _____

1 The **heat absorbed** when ice melts can be measured in a **unit** called a

- A torr
- B degree
- C mole
- D calorie



2 Which substance is a **binary compound**?

- A ammonia
- B argon
- C glucose
- D glycerol

3 Which sample of matter is a **mixture**?

- A H₂O(s)



4 An example of a **synthetic polymer** is

- A starch

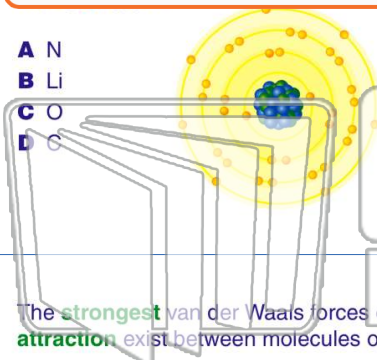


PREVIEW

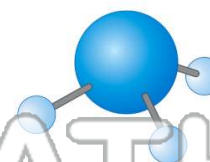
Please [Sign In](#) or [Sign Up](#) to download the printable version of this worksheet

7

- A N
- B Li
- C O
- D C




- A CCl₄
- B CO₂
- C N₂
- D NH₃



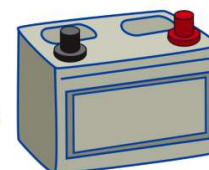
9 The **strongest** van der Waals forces of **attraction** exist between molecules of

- A I₂
- B Br₂
- C Cl₂
- D F₂



10 Which type of **chemical reaction** occurs in a lead-acid battery?

- A addition
- B substitution
- C esterification
- D oxidation-reduction

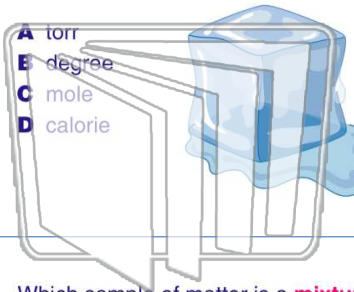




Name _____ Class _____ Date _____

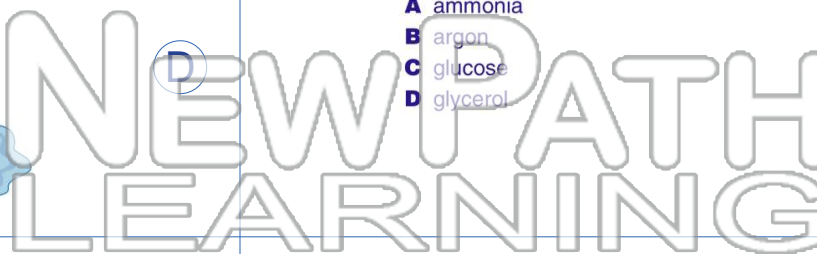
1 The **heat absorbed** when ice melts can be measured in a **unit** called a

- A torr
- B degree
- C mole
- D calorie



2 Which substance is a **binary compound**?

- A ammonia
- B argon
- C glucose
- D glycerol



3 Which sample of matter is a **mixture**?

- A H₂O(s)



4 An example of a **synthetic polymer** is

- A starch

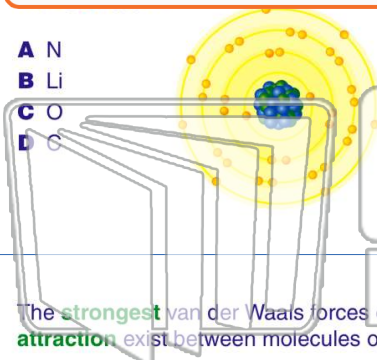


PREVIEW

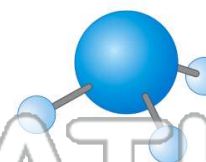
Please [Sign In](#) or [Sign Up](#) to download the printable version of this worksheet

7

- A N
- B Li
- C O
- D C




- A CCl₄
- B CO₂
- C N₂
- D NH₃



9 The **strongest** van der Waals forces of **attraction** exist between molecules of

- A I₂
- B Br₂
- C Cl₂
- D F₂



10 Which type of **chemical reaction** occurs in a lead-acid battery?

- A addition
- B substitution
- C esterification
- D oxidation-reduction

