



Name _____ Class _____ Date _____

1 According to the line graph, on what day did Adam run the mile the slowest?

A Monday
B Tuesday
C Wednesday
D Friday

2 This map shows the population of the U.S. in the year _____.

A 2007
B 2003
C 2005
D 2004

3 What day does John have the job of cleaning up?

Name	Day	Job
John	Tuesday	Cleaning up

4 This graph shows how many boys were absent from school.

5th GRADE ATTENDANCE

5

PREVIEW

Please [Sign In](#) or [Sign Up](#) to download the printable version of this worksheet

7 baseball cards last month?

A 20%
B 2%
C 12%
D 32%

8

A centimeter
B inch
C kilometer
D mile

9 How tall is A.J. Smith?

Name	Position	Height	Weight
Jack Jones	Linebacker	6'1"	300 lbs.
A.J. Smith	Quarterback	6'3"	225 lbs.
Tyler Knapp	Halfback	6'0"	265 lbs.

A 6'3"
B 6'0"
C 6'1"
D 5'3"

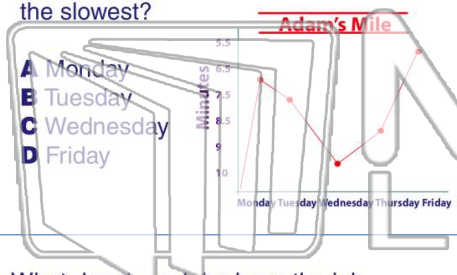
10 According to the bar graph, what city has an estimated population of 2,850,000 people?

A Houston
B Chicago
C Los Angeles
D New York City



Name _____ Class _____ Date _____

1 According to the line graph, on what day did Adam run the mile the slowest?



- A Monday
- B Tuesday
- C Wednesday
- D Friday

2 This map shows the population of the U.S. in the year _____.



- A 2007
- B 2003
- C 2005
- D 2004

3 What day does John have the job of cleaning up?

Name	Day	Job
John	Tuesday	Cleaning up

4 This graph shows how many boys were absent from school.

5th GRADE ATTENDANCE

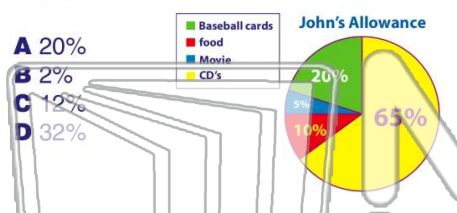


5

PREVIEW


Please [Sign In](#) or [Sign Up](#) to download the printable version of this worksheet

7 baseball cards last month?



- A 20%
- B 2%
- C 12%
- D 32%

- A centimeter
- B inch
- C kilometer
- D mile

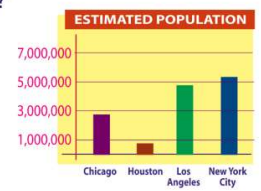


9 How tall is A.J. Smith?

Name	Position	Height	Weight
Jack Jones	Linebacker	6'1"	300 lbs.
A.J. Smith	Quarterback	6'3"	225 lbs.
Tyler Knapp	Halfback	6'0"	265 lbs.

- A 6'3"
- B 6'0"
- C 6'1"
- D 5'3"

10 According to the bar graph, what city has an estimated population of 2,850,000 people?



- A Houston
- B Chicago
- C Los Angeles
- D New York City