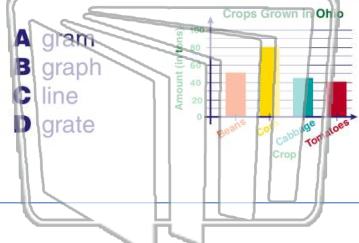




Name _____ Class _____ Date _____

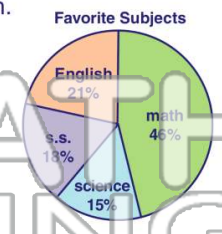
1 A **visual aid** that helps a student **understand relationships** between sets of numbers is known as a



- A gram
- B graph
- C line
- D grate

2 A **round graph** is known as a(n) _____ graph.

- A bar
- B picture
- C circle
- D line



3 In a circle graph, each piece represents **part of the whole**.

True or false? Windy

4 In a circle graph, **all of the wedges** add up to _____ percent.

Favorite Subjects

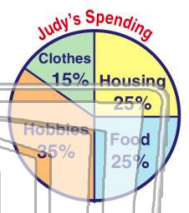
PREVIEW

Please [Sign In](#) or [Sign Up](#) to download the printable version of this worksheet

5

7

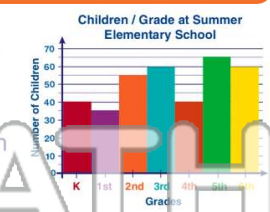
True or false?



- A true
- B false

Relationships:

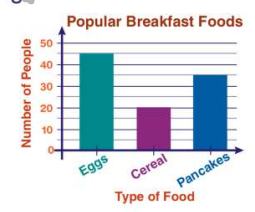
- A circle graph
- B line graph
- C bar graph
- D picture graph



9 When reading a bar graph, the **length** of each bar is significant.

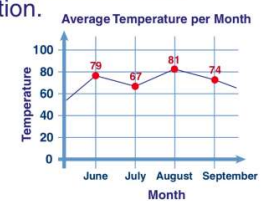
True or false?

- A true
- B false



10 Bar graphs and line graphs use **horizontal and vertical** axes to show information.

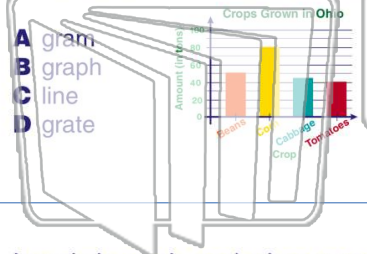
- A verbal
- B line
- C x-
- D vertical





Name _____ Class _____ Date _____

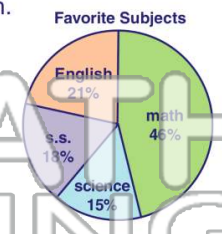
1 A **visual aid** that helps a student understand relationships between sets of numbers is known as a



- A gram
- B graph
- C line
- D grate

2 A **round graph** is known as a(n) _____ graph.

- A bar
- B picture
- C circle
- D line



3 In a circle graph, each piece represents **part of the whole**.

True or false? _____

4 In a circle graph, **all of the wedges** add up to _____ percent.

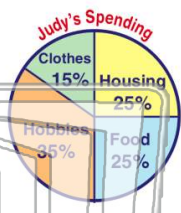
Favorite Subjects

PREVIEW

Please [Sign In](#) or [Sign Up](#) to download the printable version of this worksheet

5

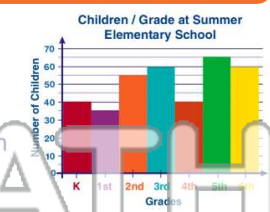
True or false? _____



- A true
- B false

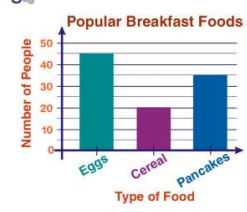
Relationship:

- A circle graph
- B line graph
- C bar graph
- D picture graph



9 When reading a bar graph, the **length of each bar** is significant.

True or false? _____



- A true
- B false

10 Bar graphs and line graphs use **horizontal and vertical** axes to show information.

- A verbal
- B line
- C x-
- D vertical

